



Guru Gobind Singh
Indraprastha
University

Guru Gobind Singh Indraprastha University

[Established by the Govt. of NCT of Delhi]

Participant ID	
Participant Name	
Test Center Name	iON Digital Zone iDZ 1 Sector 62
Test Date	25/06/2022
Test Time	8:00 AM - 10:30 AM
Subject	Bachelor of Hotel Management & Catering Technology

Section : English Language & Comprehension

Q.1

Identify the part with grammatical error in the sentence given below.

My son (A)/ can't hardly (B)/ wait till his birthday.(C)/ No error (D)

- a. A
- b. B
- c. C
- d. D

Ans ☒ A. (a)

☒ B. (b)

☒ C. (c)

☒ D. (d)

Question ID : 61477213363

Status : Answered

Chosen Option : D

Q.2

Identify the word which is similar in meaning to "RESCIND"

- a. Withhold
- b. Countermand
- c. Hamper
- d. Suppress

Ans ☒ A. (a)

☒ B. (b)

☒ C. (c)

☒ D. (d)

Question ID : 61477213368




Status : Answered

Chosen Option : B

Q.3

Identify the word which is opposite in meaning to "FUSION"

- a. Union
- b. Participation
- c. Isolation
- d. Marriage

Ans  A. (a)
 B. (b)
 C. (c)
 D. (d)





Question ID : 61477213369
Status : Answered
Chosen Option : A

Q.4

Chose the word which is opposite in meaning to the underlined word in the sentence given below.

It is not difficult to take note of his immaculate style of writing.

- a. stained
- b. uneven
- c. impure
- d. flawed

Ans  A. (a)
 B. (b)
 C. (c)
 D. (d)

Question ID : 61477213380
Status : Answered
Chosen Option : B

Q.5

Identify the word which is opposite in meaning to "DISASTER"

- a. Puzzle
- b. Success
- c. Omen
- d. Festival





Ans  A. (a)
 B. (b)
 C. (c)
 D. (d)

Question ID : 61477213370
Status : Answered
Chosen Option : B

Q.6

Select the sentence which is grammatically correct from the following:

- a. An argument developed among his sister and him.
- b. An argument developed between his sister and he.
- c. An argument developed between his sister and his.
- d. An argument developed between his sister and him.

Ans  A. (a)
 B. (b)
 C. (c)
 D. (d)

Question ID : 61477213364





Status : Answered

Chosen Option : D

Q.7

Find the odd word out of the options given below.

- a. Commentary
- b. Critique
- c. Authority
- d. Review

Ans  A. (a)
 B. (b)
 C. (c)
 D. (d)

Question ID : 61477213365

Status : Answered





Chosen Option : B

Q.8

Chose the correct passive voice statement of the sentence given below from the options that follow:

All the examinees have answered one particular question in the long answer writing section.

- a. One particular question is answered by all the examinees in the long answer writing section
- b. One particular question was answered by all the examinees in the long answer writing section
- c. All the examinees answered one particular question in the long answer writing section
- d. One particular question has been answered by all the examinees in the long answer writing section

Ans  A. (a)
 B. (b)
 C. (c)
 D. (d)

Question ID : 61477213373

Status : Answered





Chosen Option : B

Q.9

Read sentence below and find out the part with grammatical error.

None of the (A)/ printers are working (B)/ properly. Are they? (C)/ No error (D)

- a. A
- b. B
- c. C
- d. D

Ans  A. (a)
 B. (b)
 C. (c)
 D. (d)

Question ID : 61477213377





Status : Answered

Chosen Option : B

Q.10

Choose the correct sentence

- a. Ramu has been working in the factory since nine in the morning.
- b. Ramu have been working in the factory since nine in the morning.
- c. Ramu has been working in the factory for nine in the morning.
- d. Ramu have worked in the factory since nine in the morning.

Ans  A. (a)
 B. (b)
 C. (c)
 D. (d)

Question ID : 61477213382

Status : Answered





Chosen Option : A

Q.11

Choose the correct word that can be substituted for the following.

"A paper written by hand"

- a. Manuscript
- b. Thesis
- c. Handicraft
- d. Handiwork

Ans  A. (a)
 B. (b)
 C. (c)
 D. (d)

Question ID : 61477213372

Status : Answered

Chosen Option : A

Q.12

Chose the word which is opposite in meaning to the underlined word in the sentence given below.

The Board of Directors showered encomium on the Chairman for his liberal policies.

- a. denunciation
- b. generosity
- c. tribute
- d. praise

Ans  A. (a)

 B. (b)

 C. (c)

 D. (d)

Question ID : 61477213379

Status : Answered

Chosen Option : B

Q.13

Find the odd word out of the options given below.

- a. Decahedron
- b. Decade
- c. Decagon
- d. Decibel

Ans  A. (a)

 B. (b)

 C. (c)

 D. (d)

Question ID : 61477213366

Status : Answered

Chosen Option : B

Q.14

Read sentence below and find out the part with grammatical error.

You are (A)/ just ten years old. (B)/ Isn't it? (C)/ No error (D)

- a. A
- b. B
- c. C
- d. D

Ans  A. (a)

 B. (b)

 C. (c)

 D. (d)

Question ID : 61477213375

Status : Answered




Chosen Option : B

Q.15

Read sentence below and find out the part with grammatical error.

The guards (A)/ dare not (B)/ to harm him (C)/ No error (D)

- a. A
- b. B
- c. C
- d. D

Ans  A. (a)
 B. (b)
 C. (c)
 D. (d)

Question ID : 61477213374

Status : Answered



Chosen Option : D

Q.16

Chose the word which is opposite in meaning to the underlined word in the sentence given below.

He produced cogent reasons for the change of policy.

- a. flimsy
- b. unconvincing
- c. improper
- d. simple

Ans  A. (a)
 B. (b)
 C. (c)
 D. (d)

Question ID : 61477213381





Status : Answered

Chosen Option : A

Q.17

Find the odd word out of the options given below.

- a. Grave
- b. Mausoleum
- c. Tomb
- d. Monument

Ans  A. (a)
 B. (b)
 C. (c)
 D. (d)

Question ID : 61477213367

Status : Answered

Chosen Option : C

Q.18

Please tick the correct meaning of the idiomatic expression "*a stone's throw*"

- a. Very short distance.
- b. Very long distance.
- c. Stone pelting.
- d. None of the above.

Ans  A. (a)

 B. (b)

 C. (c)

 D. (d)

Question ID : 61477213371

Status : Answered

Chosen Option : A

Q.19

Read sentence below and find out the part with grammatical error.

My brother (A)/ has got infected (B)/ with Corona. (C)/ Has he?(D)

- a. A
- b. B
- c. C
- d. D

Ans  A. (a)

 B. (b)

 C. (c)

 D. (d)

Question ID : 61477213376

Status : Answered

Chosen Option : C

Q.20

Chose the word which is nearest in meaning to the underlined word in the sentence given below.

This library was built with donations from the munificent citizens of the city.

- a. Well-to-do
- b. Generous
- c. Respectable
- d. Learned

Ans  A. (a)

 B. (b)

 C. (c)

 D. (d)

Question ID : 61477213378

Status : Answered

Chosen Option : B

Comprehension:

Dostoevsky's parents Maria Fyodorovna and Mikhail Andreevich were devoted to their children's education, instilling in them a love of European and Russian literature as well as a solid religious upbringing. Both the religious dimension of Dostoevsky's novels and his use of Gothic features and melodramatic plots can be traced back to his childhood reading. However, when it came to formal education and planning children's future careers, Dostoevsky's father Mikhail Andreevich favored the military he had chosen himself, and sent his two eldest sons to Petersburg to study at the Academy of Military Engineers in 1837. Their mother died shortly before their departure, and their father two years later. Rumors long circulated to the effect that he had been murdered by his serfs in revenge for his brutal treatment, and this version of events is repeated in numerous critical and biographical works. It now seems likely that he in fact died of a stroke, but Dostoevsky himself appears to have believed the rumors and felt his own measure of responsibility for the supposed crime.

SubQuestion No : 21

Q.21 The melodrama in Dostoevsky's novels can be traced to

- a. his childhood reading
- b. his mother's love for Russian literature
- c. his father's love for European literature
- d. all the above

Ans  A. (a)

 B. (b)

 C. (c)

 D. (d)

Question ID : **61477213388**

Status : **Answered**

Chosen Option : **A**

Comprehension:

Dostoevsky's parents Maria Fyodorovna and Mikhail Andreevich were devoted to their children's education, instilling in them a love of European and Russian literature as well as a solid religious upbringing. Both the religious dimension of Dostoevsky's novels and his use of Gothic features and melodramatic plots can be traced back to his childhood reading. However, when it came to formal education and planning children's future careers, Dostoevsky's father Mikhail Andreevich favored the military he had chosen himself, and sent his two eldest sons to Petersburg to study at the Academy of Military Engineers in 1837. Their mother died shortly before their departure, and their father two years later. Rumors long circulated to the effect that he had been murdered by his serfs in revenge for his brutal treatment, and this version of events is repeated in numerous critical and biographical works. It now seems likely that he in fact died of a stroke, but Dostoevsky himself appears to have believed the rumors and felt his own measure of responsibility for the supposed crime.

SubQuestion No : 22**Q.22**

Serf means _____

- a. Savior
- b. Protester
- c. Slave
- d. Driver

Ans

- ☒ A. (a)
- ☒ B. (b)
- ☒ C. (c)
- ☒ D. (d)

Question ID : **61477213386**Status : **Answered**Chosen Option : **B**

Comprehension:

Dostoevsky's parents Maria Fyodorovna and Mikhail Andreevich were devoted to their children's education, instilling in them a love of European and Russian literature as well as a solid religious upbringing. Both the religious dimension of Dostoevsky's novels and his use of Gothic features and melodramatic plots can be traced back to his childhood reading. However, when it came to formal education and planning children's future careers, Dostoevsky's father Mikhail Andreevich favored the military he had chosen himself, and sent his two eldest sons to Petersburg to study at the Academy of Military Engineers in 1837. Their mother died shortly before their departure, and their father two years later. Rumors long circulated to the effect that he had been murdered by his serfs in revenge for his brutal treatment, and this version of events is repeated in numerous critical and biographical works. It now seems likely that he in fact died of a stroke, but Dostoevsky himself appears to have believed the rumors and felt his own measure of responsibility for the supposed crime.

SubQuestion No : 23**Q.23**

Dostoevsky's novels contain

- a. sensational and emotive elements
- b. religious dimensions
- c. both a and b
- d. neither a nor b

Ans  A. (a) B. (b) C. (c) D. (d)Question ID : **61477213384**Status : **Answered**Chosen Option : **B**

Comprehension:

Dostoevsky's parents Maria Fyodorovna and Mikhail Andreevich were devoted to their children's education, instilling in them a love of European and Russian literature as well as a solid religious upbringing. Both the religious dimension of Dostoevsky's novels and his use of Gothic features and melodramatic plots can be traced back to his childhood reading. However, when it came to formal education and planning children's future careers, Dostoevsky's father Mikhail Andreevich favored the military he had chosen himself, and sent his two eldest sons to Petersburg to study at the Academy of Military Engineers in 1837. Their mother died shortly before their departure, and their father two years later. Rumors long circulated to the effect that he had been murdered by his serfs in revenge for his brutal treatment, and this version of events is repeated in numerous critical and biographical works. It now seems likely that he in fact died of a stroke, but Dostoevsky himself appears to have believed the rumors and felt his own measure of responsibility for the supposed crime.

SubQuestion No : 24**Q.24**

Which of the following is the plausible cause of Mikhail Andreevich's death?

- a. He was murdered
- b. He died of heart attack
- c. He was treated brutally by serfs
- d. He died due to the crime committed by Dostoevsky

Ans  A. (a) B. (b) C. (c) D. (d)Question ID : **61477213385**Status : **Answered**Chosen Option : **A**

Comprehension:

Dostoevsky's parents Maria Fyodorovna and Mikhail Andreevich were devoted to their children's education, instilling in them a love of European and Russian literature as well as a solid religious upbringing. Both the religious dimension of Dostoevsky's novels and his use of Gothic features and melodramatic plots can be traced back to his childhood reading. However, when it came to formal education and planning children's future careers, Dostoevsky's father Mikhail Andreevich favored the military he had chosen himself, and sent his two eldest sons to Petersburg to study at the Academy of Military Engineers in 1837. Their mother died shortly before their departure, and their father two years later. Rumors long circulated to the effect that he had been murdered by his serfs in revenge for his brutal treatment, and this version of events is repeated in numerous critical and biographical works. It now seems likely that he in fact died of a stroke, but Dostoevsky himself appears to have believed the rumors and felt his own measure of responsibility for the supposed crime.

SubQuestion No : 25**Q.25**


Maria died _____

- a. two years after the death of Dostoevsky's father.
- b. shortly after Dostoevsky left for Academy of Military Engineers in Petersburg
- c. around the year 1837
- d. due to a stroke

Ans  A. (a) B. (b) C. (c) D. (d)Question ID : **61477213387**Status : **Answered**Chosen Option : **C**Section : **General Awareness****Q.1**

Zero Discrimination Day is celebrated on _____

- a. 1st May
- b. 1st November
- c. 15th March
- d. 1st March

Ans  A. (a) B. (b) C. (c) D. (d)Question ID : **61477213394**Status : **Answered**Chosen Option : **B**

Q.2

Who is the current Secretary-General of World Tourism Organization?

- a. Zurab Pololikashvili
- b. Adam Goldstein
- c. Valeria Mazza
- d. Michael Frenzel

Ans  A. (a) B. (b) C. (c) D. (d)

Question ID : 61477213404

Status : Not Answered

Chosen Option : --

Q.3

The Head Quarters of Asian Development Bank is located at _____

- a. Jakarta
- b. Metro Manila
- c. Shanghai
- d. Bangkok

Ans  A. (a) B. (b) C. (c) D. (d)

Question ID : 61477213402

Status : Answered

Chosen Option : D

Q.4

Which of the following is called 'The Bible of Tamil Land'?

- a. Thirukkural
- b. Tolkappiyam
- c. Silappadikaram
- d. Manimekalai

Ans  A. (a) B. (b) C. (c) D. (d)

Question ID : 61477213408

Status : Not Answered

Chosen Option : --

Q.5 The field which is not covered under the Nobel Prize awards is _____

- a. Peace
- b. Chemistry
- c. Medicine
- d. Mathematics

Ans ☒ A. (a)
☒ B. (b)
☒ C. (c)
☒ D. (d)

Question ID : 61477213406
Status : Answered
Chosen Option : A

Q.6 Normally Blue Moon will occur _____

- a. once every year
- b. once in 2-3 years
- c. once in 4 years
- d. in a leap year

Ans ☒ A. (a)
☒ B. (b)
☒ C. (c)
☒ D. (d)

Question ID : 61477213396
Status : Answered
Chosen Option : B

Q.7 Suez Canal was blocked by a container ship named _____ in August 2021

- a. Ever Given
- b. Ever Green
- c. Amadea
- d. Wonder of the Seas

Ans ☒ A. (a)
☒ B. (b)
☒ C. (c)
☒ D. (d)

Question ID : 61477213399
Status : Answered
Chosen Option : B

Q.8

Which of the following Indian states has declared itself as first “rabies free” state?

- a. Himachal Pradesh
- b. Kerala
- c. Goa
- d. Karnataka

Ans ☒ A. (a)☒ B. (b)☒ C. (c)☒ D. (d)

Question ID : 61477213400

Status : Answered

Chosen Option : B

Q.9

The historic *Dandi* march is associated with

- a. Boycott of elections
- b. Violation of “salt” law
- c. Hindu-Muslim unity
- d. Abolition of untouchability

Ans ☒ A. (a)☒ B. (b)☒ C. (c)☒ D. (d)

Question ID : 61477213409

Status : Answered

Chosen Option : B

Q.10

The Konark temple in Odisha is dedicated to

- a. Lord Indra
- b. Lord Rama
- c. Sun God
- d. None of these

Ans ☒ A. (a)☒ B. (b)☒ C. (c)☒ D. (d)

Question ID : 61477213410

Status : Answered

Chosen Option : B

Q.11

Which of the following is present in virus?

- a. Ribosomes
- b. Cell wall
- c. Both a & b
- d. Neither a nor b

Ans ☒ A. (a)
☒ B. (b)
☒ C. (c)
☒ D. (d)

Question ID : 61477213398

Status : Answered

Chosen Option : B

Q.12

The number of Union Territories in India, as on May 2022, excluding the National Capital Territory of Delhi is:

- a. 6
- b. 5
- c. 7
- d. 8

Ans ☒ A. (a)
☒ B. (b)
☒ C. (c)
☒ D. (d)

Question ID : 61477213389

Status : Answered

Chosen Option : D

Q.13

Who among the following was the first space tourist from India?

- a. Santhosh George Kulangara
- b. Rakesh Sharma
- c. Kalpana Chawla
- d. Shirisha Bandla

Ans ☒ A. (a)
☒ B. (b)
☒ C. (c)
☒ D. (d)

Question ID : 61477213397

Status : Answered

Chosen Option : C

Q.14

Which of the following is the state bird of NCT of Delhi?

- a. Asian Koel
- b. Sarus Crane
- c. Wood Pigeon
- d. House Sparrow

Ans  A. (a) B. (b) C. (c) D. (d)

Question ID : 61477213390

Status : Answered

Chosen Option : D

Q.15

The border demarcation line between Israel and Lebanon is known as _____

- a. Green Line
- b. Blue Line
- c. Maginot Line
- d. Arafat Line

Ans  A. (a) B. (b) C. (c) D. (d)

Question ID : 61477213395

Status : Answered

Chosen Option : C

Q.16

India's Sex Ratio at birth as per the recent Economic Survey 2022 is:

- a. 919
- b. 929
- c. 939
- d. 1020

Ans  A. (a) B. (b) C. (c) D. (d)

Question ID : 61477213391

Status : Answered

Chosen Option : D

Q.17

Who presides over the meetings of the *Rajya Sabha* ?

- a. Speaker
- b. Prime Minister
- c. President of India
- d. Vice-President

Ans ☒ A. (a)
☒ B. (b)
☒ C. (c)
☒ D. (d)

Question ID : 61477213412

Status : Answered

Chosen Option : C

Q.18

What is the name of the sport in which India won its first ever Gold Medal in In Tokyo Olympics.

- a. Cycling
- b. Rifle Shooting
- c. Javelin Throw
- d. Badminton

Ans ☒ A. (a)
☒ B. (b)
☒ C. (c)
☒ D. (d)

Question ID : 61477213405

Status : Answered

Chosen Option : C

Q.19

Statue of Unity is a monument associated with:

- a. First Home Minister of India
- b. First Prime Minister of India
- c. First Defence Minister of India
- d. First Labour Minister of India

Ans ☒ A. (a)
☒ B. (b)
☒ C. (c)
☒ D. (d)

Question ID : 61477213413

Status : Answered

Chosen Option : A

Q.20

2023 ICC Men's World Cup Cricket tournament is scheduled to be held in _____

- a. West Indies
- b. South Africa
- c. Australia
- d. India

Ans ☒ A. (a)☒ B. (b)☒ C. (c)☒ D. (d)

Question ID : 61477213401

Status : Answered

Chosen Option : B

Q.21

Blue Revolution is related to:

- a. Space research
- b. Drinking water
- c. Fisheries
- d. None of these

Ans ☒ A. (a)☒ B. (b)☒ C. (c)☒ D. (d)

Question ID : 61477213411

Status : Answered

Chosen Option : C

Q.22

Prof Muhammad Yunus is known for his work related to the _____

- a. protection of Child Rights
- b. protection of Human Rights
- c. microcredit for poor
- d. Fight against Human trafficking

Ans ☒ A. (a)☒ B. (b)☒ C. (c)☒ D. (d)

Question ID : 61477213407

Status : Not Answered

Chosen Option : --

Q.23

Who among the following appointed as Chief Election Commissioner of India in May 2022?

- a. Sunil Arora
- b. Sushil Chandra
- c. Rajiv Kumar
- d. O P Rawat

Ans  A. (a) B. (b) C. (c) D. (d)

Question ID : 61477213392

Status : Answered

Chosen Option : B

Q.24

International Air Transport Association has its Head Quarters at _____

- a. Geneva
- b. Amsterdam
- c. Montreal
- d. Brussels

Ans  A. (a) B. (b) C. (c) D. (d)

Question ID : 61477213403

Status : Not Answered

Chosen Option : --

Q.25

The Information Technology (Intermediary Guidelines and Digital Media Ethics Code) Rules, 2021 require social media platforms to:

- a. Appoint Chief Compliance Officer
- b. Resident Grievance Officer
- c. Both a & b
- d. Nither a nor b

Ans  A. (a) B. (b) C. (c) D. (d)

Question ID : 61477213393

Status : Answered





Chosen Option : C

Section : Logical and Analytical Ability including Computer Awareness

Q.1

Which one of the following is not an output device?

- a. Projector
- b. Headphones
- c. Plotter
- d. Joystick

Ans  A. (a)
 B. (b)
 C. (c)
 D. (d)

Question ID : 61477213435

Status : Answered

Chosen Option : C

Q.2

Given below are statements followed by four conclusions numbered I, II, III & IV.

Chose the conclusions that logically follow from the given statements from the options.

Statements: All politicians are honest. All honest are fair.





Conclusion: I. Some honest are politician

II. No honest is politician

III. Some fair are politician

IV. All fair are politician

- a. None follows
- b. Only I follows
- c. Only I and II follow
- d. Only I and III follow

Ans  A. (a)
 B. (b)
 C. (c)
 D. (d)

Question ID : 61477213428

Status : Answered

Chosen Option : A

Q.3

Given below are statements followed by four conclusions numbered I, II, III & IV.

Chose the conclusions that logically follow from the given statements from the options.

Statement : All branches are flowers. All flowers are leaves.

Conclusions: I. All branches are leaves.

II. All leaves are branches.

III. All flowers are branches.

IV. Some leaves are branches.

- a. None follows
- b. Only I and IV follow
- c. Only II and III follow
- d. All follow

Ans  A. (a)

 B. (b)

 C. (c)

 D. (d)

Question ID : 61477213427

Status : Answered

Chosen Option : A

Q.4

CD-ROM is an example of

- a. Primary memory
- b. Read-Write memory
- c. Cache memory
- d. Read only memory

Ans  A. (a)

 B. (b)

 C. (c)

 D. (d)

Question ID : 61477213438





Status : Answered

Chosen Option : C

Q.5

At the end of a business conference the all ten people present shake hands with each other once. How many handshakes will there be altogether?

- a. 20
- b. 45
- c. 55
- d. 90

Ans  A. (a)
 B. (b)
 C. (c)
 D. (d)

Question ID : 61477213415





Status : Answered

Chosen Option : A

Q.6

This software is copyrighted and bears the limits against use.

- a. Proprietary software
- b. Open-source software
- c. Application software
- d. System software

Ans  A. (a)
 B. (b)
 C. (c)
 D. (d)

Question ID : 61477213443




Status : Not Answered

Chosen Option : --

Q.7

Choose out the odd one.

- a. Attlee
- b. Bevin
- c. Chamberlain
- d. Churchill

Ans  A. (a)
 B. (b)
 C. (c)
 D. (d)

Question ID : 61477213433

Status : Not Answered





Chosen Option : --

Q.8

Choose the missing characters from the given alternatives:

6	9	15
8	12	20
4	6	?

- a. 5
- b. 10
- c. 15
- d. 21





Ans  A. (a)
 B. (b)
 C. (c)
 D. (d)

Question ID : **61477213420**
Status : **Answered**
Chosen Option : **B**

Q.9

Which of the following groups consists of only input devices?

- a. Mouse, Keyboard, Monitor
- b. Mouse, Keyboard, Printer
- c. Mouse, Keyboard, Plotter
- d. Mouse, Keyboard, Scanner

Ans  A. (a)
 B. (b)
 C. (c)
 D. (d)





Question ID : **61477213439**
Status : **Answered**
Chosen Option : **C**

Q.10

Select the most appropriate alternative as the answer.

Your boss has very piercing eyes and spies on your performance all the time. You will

- a. ignore the uncomfortable glances as it is his job
- b. subtly convey it to the boss
- c. tell your seniors clearly that such supervision affects your performance
- d. just do your work

Ans  A. (a)
 B. (b)
 C. (c)
 D. (d)

Question ID : **61477213423**
Status : **Answered**
Chosen Option : **B**

Q.11

The term Bit is short for

- a. Megabyte
- b. Binary language
- c. Binary digit
- d. Binary number

Ans ☒ A. (a)
☒ B. (b)
☒ C. (c)
☒ D. (d)

Question ID : 61477213441

Status : Answered

Chosen Option : D

Q.12

Choose the missing characters from the given alternatives:

1	4	?
4	2	5
2	2	3
49	64	169

- a. 3
- b. 4
- c. 5
- d. 6

Ans ☒ A. (a)
☒ B. (b)
☒ C. (c)
☒ D. (d)

Question ID : 61477213419

Status : Answered

Chosen Option : C

Q.13

Which is not an item of hardware?

- a. An MP3 file
- b. A keyboard
- c. A mouse
- d. Printer

Ans ☒ A. (a)
☒ B. (b)
☒ C. (c)
☒ D. (d)

Question ID : 61477213440

Status : Answered

Chosen Option : A

Q.14

A group of 1200 persons consisting of captains and soldiers is travelling in a train. For every 15 soldiers there is one captain. The number of captains in the group is:

- a. 85
- b. 80
- c. 75
- d. 70

Ans ☒ A. (a)
☒ B. (b)
☒ C. (c)
☒ D. (d)

Question ID : 61477213414

Status : Answered

Chosen Option : B

Q.15

A statement given below is followed by four arguments numbered I, II, III and IV. Choose the arguments which is/are 'strong' argument (s) from the alternatives given.

Statement: Should the consumption of aerated drinks be banned in India?

- Arguments:
- I. Yes. This is the only way to reduce the risk of exposing people to some disease.
 - II. No. Each individual should have rights to choose what he wants.
 - III. No. There is no confirmed evidence that such product have adverse effects on human body.
 - IV. Yes. It is banned in many other countries also.

- a. Only I is strong
- b. Only I and II are strong
- c. Only II is strong
- d. Only I and IV are strong

Ans ☒ A. (a)
☒ B. (b)
☒ C. (c)
☒ D. (d)

Question ID : 61477213430

Status : Answered

Chosen Option : D

Q.16

Choose the best alternative as the answer.

A camera always has _____.

- a. Lens
- b. Reels
- c. Flash
- d. Photograph

Ans  A. (a) B. (b) C. (c) D. (d)

Question ID : 61477213426

Status : Answered

Chosen Option : A

Q.17

Which of the following is known as father of computer?

- a. Dennis Ritchie
- b. Napier
- c. Charles Babbage
- d. Alan Turing

Ans  A. (a) B. (b) C. (c) D. (d)

Question ID : 61477213437

Status : Answered

Chosen Option : C

Q.18

A statement given below is followed by four arguments numbered I, II, III and IV.
Choose the arguments which is/are 'strong' argument (s) from the alternatives given.

Statements: Should India go in for computerization in all possible sectors?

- Arguments:
- I. Yes. It will bring efficiency and accuracy in the work.
 - II. No. It will be an injustice to the monumental human resources which are at present under- utilized.
 - III. No. Computerization demands a lot of money. We should not waste money on it.
 - IV. Yes. When advanced countries are introducing computers in every field, how can India afford to lag behind?
- a. Only I is strong
b. Only I and II are strong
c. Only I and III are strong
d. Only II and III are strong

Ans  A. (a)

 B. (b)

 C. (c)

 D. (d)

Question ID : 61477213429

Status : Answered

Chosen Option : B

Q.19

Scrap : Food :: Lees : ?

- a. Bread
- b. Tea
- c. Wine
- d. Rice

Ans  A. (a)

 B. (b)

 C. (c)

 D. (d)

Question ID : 61477213432

Status : Answered

Chosen Option : C

Q.20

Choose the missing characters from the given alternatives:

6	11	25
8	6	16
12	5	?

- a. 18
- b. 16
- c. 12
- d. 10

Ans  A. (a) B. (b) C. (c) D. (d)

Question ID : 61477213421

Status : Answered

Chosen Option : B

Q.21

Choose the missing characters from the given alternatives:

6	6	8
5	7	5
4	3	?
120	126	320

- a. 4
- b. 8
- c. 12
- d. 16

Ans  A. (a) B. (b) C. (c) D. (d)

Question ID : 61477213418

Status : Answered

Chosen Option : B

Q.22

Select the most appropriate alternative as the answer.

When you see a blind man trying to cross the road, you

- a. ask someone to help him
- b. go and help him
- c. wait till he crosses the road
- d. ignore and move on

Ans ☒ A. (a)
☒ B. (b)
☒ C. (c)
☒ D. (d)

Question ID : 61477213422

Status : Answered

Chosen Option : B

Q.23

What type of device is a computer mouse?

- a. Storage
- b. Output
- c. Input
- d. Input/output

Ans ☒ A. (a)
☒ B. (b)
☒ C. (c)
☒ D. (d)

Question ID : 61477213436

Status : Answered

Chosen Option : C

Q.24

Choose the best alternative as the answer.

A clock always has _____ .

- a. Battery
- b. Numbers
- c. Alarm
- d. Needles

Ans ☒ A. (a)
☒ B. (b)
☒ C. (c)
☒ D. (d)

Question ID : 61477213424

Status : Answered





Chosen Option : A

Q.25

Choose the best alternative as the answer.

A river always has _____.

- a. Delta
- b. Tributaries
- c. Boats
- d. Banks





Ans  A. (a)
 B. (b)
 C. (c)
 D. (d)

Question ID : 61477213425
Status : Answered
Chosen Option : D

Q.26

There are deers and peacocks in a zoo. By counting heads they are 80. The number of their legs is 200. How many peacocks are there?

- a. 20
- b. 30
- c. 50
- d. 60





Ans  A. (a)
 B. (b)
 C. (c)
 D. (d)

Question ID : 61477213417
Status : Answered
Chosen Option : A

Q.27

Examples of open-source software is/are

- a. Linux
- b. Unix
- c. MySQL
- d. All of these

Ans  A. (a)
 B. (b)
 C. (c)
 D. (d)

Question ID : 61477213442
Status : Answered
Chosen Option : D

Q.28

A farmer built a fence around his square plot. He used 27 fence poles on each side of the square. How many poles did he need altogether?

- a. 100
- b. 102
- c. 104
- d. 108

Ans  A. (a)
 B. (b)
 C. (c)
 D. (d)

Question ID : 61477213416



Status : Answered

Chosen Option : D

Q.29

Square : Diamond :: Circle : ?

- a. Smooth
- b. Round
- c. Oval
- d. Ball

Ans  A. (a)
 B. (b)
 C. (c)
 D. (d)

Question ID : 61477213431





Status : Answered

Chosen Option : D

Q.30

The part of a computer that coordinates all its functions, is called

- a. ROM program
- b. System board
- c. Arithmetic logic unit
- d. Control unit

Ans  A. (a)
 B. (b)
 C. (c)
 D. (d)

Question ID : 61477213434

Status : Answered

Chosen Option : A

Section : Accounting, Commerce and Science

Q.1

Advance received from customers is not taken as sale. The relevant principle applied is:

- a. Consistency principle
- b. Conservation principle
- c. Money measurement principle
- d. Accrual principle

Ans  A. (a) B. (b) C. (c) D. (d)

Question ID : 61477213451

Status : Not Answered

Chosen Option : --

Q.2

In the primary market a company can raise funds by issuing

- a. equity shares
- b. preference shares
- c. debentures
- d. all of the above

Ans  A. (a) B. (b) C. (c) D. (d)

Question ID : 61477213449

Status : Answered

Chosen Option : D

Q.3

On 1.1.2022 furniture worth Rs 50,000 and machinery worth Rs 1,00,000 is purchased. On 31.3.2022 depreciation is to be charged in Profit and loss account @ 10% on furniture and 20% on machinery. The depreciation is

- a. Rs 5625
- b. Rs 12500
- c. Rs 11250
- d. Rs 6250

Ans  A. (a) B. (b) C. (c) D. (d)

Question ID : 61477213450

Status : Answered

Chosen Option : D

Q.4

How many companies are included in BSE Sensex?

- a. 30
- b. 25
- c. 50
- d. 100

Ans  A. (a) B. (b) C. (c) D. (d)

Question ID : 61477213456

Status : Not Answered

Chosen Option : --

Q.5

The black opening between the aqueous humour and the lens is called

- a. retina
- b. iris
- c. cornea
- d. pupil

Ans  A. (a) B. (b) C. (c) D. (d)

Question ID : 61477213460

Status : Answered

Chosen Option : D

Q.6

The most abundant metal in the earth's crust, among the following, is

- a. iron
- b. aluminium
- c. calcium
- d. sodium

Ans  A. (a) B. (b) C. (c) D. (d)

Question ID : 61477213463




Status : Answered

Chosen Option : B

Q.7

GST rates applicable on goods and services are:

- a. 0% 5% 12% 18% 26%
- b. 0% 5% 12% 15% 28%
- c. 0% 5% 12% 16% 28%
- d. 0% 5% 12% 18% 28%

Ans  A. (a)
 B. (b)
 C. (c)
 D. (d)

Question ID : 61477213454





Status : Answered

Chosen Option : D

Q.8

Carriage inward is debited to:

- a. Trading account
- b. Profit and loss account
- c. Profit and loss appropriation account
- d. Balance sheet

Ans  A. (a)
 B. (b)
 C. (c)
 D. (d)

Question ID : 61477213453





Status : Answered

Chosen Option : C

Q.9

Anatomy is a branch of science which deals with

- a. functioning of body organs
- b. animal behaviour
- c. structure of animals and plants
- d. cells and tissues

Ans  A. (a)
 B. (b)
 C. (c)
 D. (d)

Question ID : 61477213459




Status : Answered

Chosen Option : C

Q.10

In Jan 2017 a machinery purchased for Rs 20,000. Depreciation is charged @ 20% diminishing balance. At the end of third year it was sold for Rs 3,000. Profit or loss on sale will be

- a. Rs 4,000
- b. Rs 8,192
- c. Rs 7,200
- d. none of the above

Ans  A. (a)
 B. (b)
 C. (c)
 D. (d)

Question ID : 61477213452




Status : Answered

Chosen Option : D

Q.11

Effectiveness in management means

- a. doing the right things
- b. doing things right
- c. both a & b
- d. neither a nor b

Ans  A. (a)
 B. (b)
 C. (c)
 D. (d)

Question ID : 61477213457





Status : Answered

Chosen Option : B

Q.12

In order to calculate current ratio, information is required with respect to:

- a. debtors
- b. cash
- c. inventory
- d. all of the above

Ans  A. (a)
 B. (b)
 C. (c)
 D. (d)

Question ID : 61477213446

Status : Answered

Chosen Option : D

Q.13

A zygote which has an X-chromosome inherited from father will develop into a

- a. female fetus
- b. male fetus
- c. either female fetus or male fetus
- d. none of the above

Ans  A. (a)

 B. (b)

 C. (c)

 D. (d)

Question ID : 61477213461

Status : Answered

Chosen Option : C

Q.14

Which of the following is not a significant function of financial market?

- a. Price discovery
- b. Mobilisation of savings
- c. Generating liquidity of financial assets
- d. Registration of companies

Ans  A. (a)

 B. (b)

 C. (c)

 D. (d)

Question ID : 61477213447

Status : Answered

Chosen Option : D

Q.15

The source of preparation of ledger account is

- a. transactions
- b. journal
- c. events
- d. profit and loss account

Ans  A. (a)

 B. (b)

 C. (c)

 D. (d)

Question ID : 61477213458

Status : Answered

Chosen Option : B

Q.16

Given the amount of sales Rs 5,40,000 and sales return Rs 40,000 and cost of goods sold Rs 4,00,000 the gross profit ratio will be:

- a. 25%
- b. 20%
- c. 10%
- d. 15%

Ans  A. (a) B. (b) C. (c) D. (d)

Question ID : 61477213445

Status : Answered

Chosen Option : B

Q.17

A man with blood group A marries a woman having blood group O. What will be the blood group of the child?

- a. O only
- b. A only
- c. AB
- d. equal chance of occurrence of blood group A or blood group O.

Ans  A. (a) B. (b) C. (c) D. (d)

Question ID : 61477213462


Status : Answered

Chosen Option : D

Q.18

Which of the following is considered as fixed assets ?

- a. unalterable assets
- b. fixed periodic receipts
- c. cash in hand
- d. plant and machinery

Ans  A. (a) B. (b) C. (c) D. (d)

Question ID : 61477213444

Status : Answered

Chosen Option : D

Q.19

If the trial balance do not match on both the sides, the difference may be entered in

- a. profit and loss account
- b. trading account
- c. capital account
- d. suspense account

Ans  A. (a) B. (b) C. (c) D. (d)

Question ID : 61477213455

Status : Answered

Chosen Option : A

Q.20

_____ market deals in monetary assets having maturity of less than one year

- a. Primary
- b. Secondary
- c. Capital
- d. Money

Ans  A. (a) B. (b) C. (c) D. (d)

Question ID : 61477213448

Status : Answered

Chosen Option : A