



Guru Gobind Singh
Indraprastha
University

Guru Gobind Singh Indraprastha University

[Established by the Govt. of NCT of Delhi]

Participant ID	
Participant Name	
Test Center Name	Radiant Digital Services
Test Date	11/09/2020
Test Time	12:30 PM - 3:00 PM
Subject	Bachelor of Commerce Honours

Section : BCOM

Q.1 Guess the meaning of the underlined words in the context and choose the similar in meaning for the same.

Banish: The hardcore criminals in Britain of the past years were banished and they had to spend the remaining days of their life in distant colonies like Austria.

- a. introduced
- b. confined
- c. awarded
- d. exiled

Ans ☒ A. 1
☒ B. 2
☒ C. 3
☒ D. 4

Question ID : 4774415526

Status : Answered

Chosen Option : 4

Q.2 Choose the word which is not a similar in meaning of the given word.
Scintillating

- a. Shining
- b. Exciting
- c. Boring
- d. Lively

Ans ☒ A. 1
☒ B. 2
☒ C. 3
☒ D. 4

Question ID : 4774415522

Status : Answered

Chosen Option : 3

Q.3 Identify a relationship between the given words and choose the word having similar relationship from the given choices:

Myriad: Numbered : Nebulous: _____

- a. Numerous
- b. Nimble
- c. Indistinct
- d. Distinct

Ans  A. 1

 B. 2

 C. 3

 D. 4

Question ID : 4774415512

Status : Answered

Chosen Option : 1

Q.4 If $X \% Y = X + Y + XY - 10$, then $10 \% 12$ is equal to

- a. 130
- b. 132
- c. 134
- d. 142

Ans  A. 1

 B. 2

 C. 3

 D. 4

Question ID : 4774415551

Status : Answered

Chosen Option : 4

Q.5 Last year, an appliance store sold an average (arithmetic mean) of 42 microwaves per month. In the first 10 months of this year, the store sold an average of only 20 microwaves per month. What is the average number of microwaves sold per month for the entire 22-month period?

- a. 21
- b. 32
- c. 30
- d. 44

Ans  A. 1

 B. 2

 C. 3

 D. 4

Question ID : 4774415533

Status : Not Answered

Chosen Option : --

Q.6 If a heavy-load trailer travels 7 miles in 1 hour and 10 minutes. What is its speed in miles per hour?

- a. 6
- b. 8
- c. 6.5
- d. 8.5

Ans  **A. 1**

 **B. 2**

 **C. 3**

 **D. 4**

Question ID : **4774415530**

Status : **Not Answered**

Chosen Option : --

Q.7 Choose the option that completes the sentence most meaningfully and appropriately:
Education polished her to become civilized, ----- and impressive.

- a. eloquent
- b. Hyperactive
- c. ambiguous
- d. insensitive

Ans  **A. 1**

 **B. 2**

 **C. 3**

 **D. 4**

Question ID : **4774415518**

Status : **Answered**

Chosen Option : 2

Q.8 Choose the option that completes the sentence most meaningfully and appropriately:
When depression ensues, logically the prices should fall for lack of buyers; but actually prices were----- in the months following depression.

- a. reduced
- b. depreciated
- c. fell
- d. escalated

Ans  **A. 1**

 **B. 2**

 **C. 3**

 **D. 4**

Question ID : **4774415517**

Status : **Answered**

Chosen Option : 4

Q.9 Bank is related to Money in the same way as Transport is related to -----.

- a. Goods
- b. Movement
- c. Road
- d. Traffic

Ans  **A. 1**

 **B. 2**

 **C. 3**

 **D. 4**

Question ID : **4774415531**

Status : **Answered**

Chosen Option : **2**

Q.10 In a certain code language, 432 means 'grass is green', 31 means 'green tree' and 162 means 'tree is long'. Which digit in that language means 'long'?

- a. 6
- b. 3
- c. 8
- d. 4

Ans  **A. 1**

 **B. 2**

 **C. 3**

 **D. 4**

Question ID : **4774415550**

Status : **Answered**

Chosen Option : **1**

Q.11 Guess the meaning of the underlined words in the context and choose the similar in meaning for the same.

Equitable: Marxism believes in equitable distribution of wealth.

- a. just
- b. unjust
- c. equal
- d. improper

Ans  **A. 1**

 **B. 2**

 **C. 3**

 **D. 4**

Question ID : **4774415528**

Status : **Answered**

Chosen Option : **3**

Q.12 Find the missing term in the following series:

5, 30, 6, 42, 7, 56,, 72, 9

- a. 4
- b. 6
- c. 5
- d. 8

Ans  A. 1

 B. 2

 C. 3

 D. 4

Question ID : 4774415536

Status : Answered

Chosen Option : 4

Q.13 Choose the option that completes the sentence most meaningfully and appropriately:

People gathered in hope of listening to a fine oratory. Quite the opposite, they left the venue-----.

- a. satisfied
- b. confused
- c. surprised
- d. disappointed

Ans  A. 1

 B. 2

 C. 3

 D. 4

Question ID : 4774415516

Status : Answered

Chosen Option : 4

Q.14 Choose the correct order of the sentences marked A, B, C, and D to form a logical paragraph.

- A- Only the next day, when it made its first attempt to free itself, did we realize how strong and dangerous it was.
B- It thrust its head into a chink between two boards and began to prose them apart with unexpected ease.
C- At first it was absolutely quiet.
D- I gave an order for enormous box of stout cedar boards to be made at one, and we placed the Anaconda into it.

- a. ABCD
b. CDAB
c. DABC
d. DCAB

Ans  A. 1

 B. 2

 C. 3

 D. 4

Question ID : 4774415504

Status : Answered

Chosen Option : 4

Q.15 Guess the meaning of the underlined words in the context and choose the similar in meaning for the same.

Beneficiary: Who is the legitimate beneficiary of Princess Gayatri Devi's huge wealth?

- a. proprietor
b. caretaker
c. inheritor
d. bungler

Ans  A. 1

 B. 2

 C. 3

 D. 4

Question ID : 4774415525

Status : Answered

Chosen Option : 2

Q.16 There are two pairs, the first pair follows some relationship. Use the same relationship to find the second analogy of the second pair.

9 : 16 :: 49 : ?

- a. 63
b. 64
c. 46
d. 36

Ans  A. 1

 B. 2

 C. 3

 D. 4

Question ID : 4774415539

Status : Answered

Chosen Option : 2

- Q.17** Choose the option that completes the sentence most meaningfully and appropriately:
A minor ----- on the road sometimes culminates into bloody bloodbath.
- a. alteration
 - b. friendship
 - c. altercation
 - d. relationship

Ans  A. 1
 B. 2
 C. 3
 D. 4

Question ID : **4774415515**
Status : **Answered**
Chosen Option : **3**

- Q.18** Given interchanges: 'signs + and -', 'numbers 10 and 6', identify the correct response from the following:
- a. $6-10+4 = 20$
 - b. $6+10-8 = 26$
 - c. $6-10-4 = 6$
 - d. $6+10-12 = 16$

Ans  A. 1
 B. 2
 C. 3
 D. 4

Question ID : **4774415552**
Status : **Answered**
Chosen Option : **4**

- Q.19** Guess the meaning of the underlined words in the context and choose the similar in meaning for the same.
Collateral: In lack of collateral of guarantor many bona fide citizens are unable to secure loan from a bank.
- a. documents
 - b. money
 - c. security
 - d. support

Ans  A. 1
 B. 2
 C. 3
 D. 4

Question ID : **4774415527**
Status : **Answered**
Chosen Option : **2**

Q.20 There are two pairs, the first pair follows some relationship. Use the same relationship to find the second analogy of the second pair.

16 : 2 :: 256 : ?

- a. 4
- b. 5
- c. 6
- d. 7

Ans  A. 1

 B. 2

 C. 3

 D. 4

Question ID : 4774415541

Status : Answered

Chosen Option : 1

Q.21 Identify the **odd** one from the following:

- a. Jahangir
- b. Akbar
- c. Vikramaditya
- d. Shah Jahan

Ans  A. 1

 B. 2

 C. 3

 D. 4

Question ID : 4774415545

Status : Answered

Chosen Option : 3

Q.22 Find the missing term in the following series:

1, 2, 9, 28,, 126, 217

- a. 65
- b. 56
- c. 271
- d. 172

Ans  A. 1

 B. 2

 C. 3

 D. 4

Question ID : 4774415537

Status : Answered

Chosen Option : 1

Q.23 Identify a relationship between the given words and choose the word having similar relationship from the given choices:

Explicit : Implied, :: _____

- a. Vicious : Violent
- b. Vibrant : Spirited
- c. Vicarious : Indirect
- d. Extempore : Rehearsed

Ans  A. 1
 B. 2
 C. 3
 D. 4

Question ID : 4774415510

Status : Answered

Chosen Option : 1

Q.24 Identify the **odd** one from the following:

- a. Crow
- b. Pigeon
- c. Tiger
- d. Parrot

Ans  A. 1
 B. 2
 C. 3
 D. 4

Question ID : 4774415546

Status : Answered

Chosen Option : 3

Q.25 Choose the correct order of the sentences marked A, B, C, and D to form a logical paragraph.

- A- On the other hand, in Gita, he is the guru, the fountainhead of knowledge.
 - B- Lord Krishna is a multifaceted personality.
 - C- He is a friend to the Pandavas and Draupadi; a spouse to Rukmini, with an equal reciprocation of love and respect; a lover- most pure and intense- to Radha.
 - D- On the one hand, in Mahabharata, he is the portrayed as a politician and diplomat.
 - E- He is a friend, a spouse and a lover – all in one.
- a. ADBCE
 - b. DABCE
 - c. BDAEC
 - d. BEDCB

Ans  A. 1
 B. 2
 C. 3
 D. 4

Question ID : 4774415508

Status : Answered

Chosen Option : 2

Q.26 Choose the correct order of the sentences marked A, B, C, and D to form a logical paragraph.

- A- Peace is a natural state of being.
B- When agitations end, peace is naturally experienced.
C- In other words, peace already exists until someone makes noise.
D- Therefore, peace underlines all out agitations.

- a. BCDA
b. ADCB
c. ABCD
d. ACDB

Ans  A. 1

 B. 2

 C. 3

 D. 4

Question ID : 4774415505

Status : Answered

Chosen Option : 3

Q.27 There are two pairs, the first pair follows some relationship. Use the same relationship to find the second analogy of the second pair.

2500 : 2450 :: 3600 : ?

- a. 3500
b. 3560
c. 3460
d. 3540

Ans  A. 1

 B. 2

 C. 3

 D. 4

Question ID : 4774415540

Status : Answered

Chosen Option : 2

Q.28 D introduces C saying, He is the husband of the granddaughter of the father of my father. How is C related to D?

- a. Uncle
b. Brother-in-law
c. Brother
d. Cousin

Ans  A. 1

 B. 2

 C. 3

 D. 4

Question ID : 4774415553

Status : Answered

Chosen Option : 3

Q.29 Salman starts from his house, travels a distance of 6 meters westwards, then travels a distance of 5 meters Northwards, then a distance of 5 meter Eastwards, and then a distance of 5 meter southwards. What is his distance from his house presently?

- a. 1 meter
- b. 2 meter
- c. 3 meter
- d. 4 meter

Ans  A. 1

 B. 2

 C. 3

 D. 4

Question ID : 4774415544

Status : Answered

Chosen Option : 1

Q.30 If 'pink' mean 'blue', 'blue' means 'white', 'white' means 'black', 'black' means 'red' and 'red' means 'green', then what is the colour of the 'blood'?

- a. red
- b. green
- c. blue
- d. black

Ans  A. 1

 B. 2

 C. 3

 D. 4

Question ID : 4774415548

Status : Answered

Chosen Option : 2

Q.31 Guess the meaning of the underlined words in the context and choose the similar in meaning for the same.

Arbitrate: The judge was known for his impartiality; and he arbitrated the case with full judiciousness.

- a. Judged
- b. meddled
- c. fabricated
- d. favored

Ans  A. 1

 B. 2

 C. 3

 D. 4

Question ID : 4774415524

Status : Answered

Chosen Option : 1

Q.32 In a certain language, PEN is written as QDM, then how BOOK will be written in that code?

- a. CMJN
- b. CNNJ
- c. CNLS
- d. NMJP

Ans  A. 1

 B. 2

 C. 3

 D. 4

Question ID : 4774415547

Status : Answered

Chosen Option : 2

Q.33 Choose the word which is not a similar in meaning of the given word.

Fascinating

- a. Fastidious
- b. Enchanting
- c. Engrossing
- d. Enthralling

Ans  A. 1

 B. 2

 C. 3

 D. 4

Question ID : 4774415523

Status : Answered

Chosen Option : 1

Q.34 Aditi travels 10 km towards North. From there, she travels 4 km towards South. Then she travels 2.5 km towards East. How far is she from the starting point?

- a. 6.5 km
- b. 6 km
- c. 8.5 km
- d. 12.5 km

Ans  A. 1

 B. 2

 C. 3

 D. 4

Question ID : 4774415534

Status : Answered

Chosen Option : 3

Q.35 Choose the word which is not a similar in meaning of the given word.

Baffle

- a. Enlighten
- b. Puzzle
- c. Mystify
- d. Confuse

Ans  A. 1

 B. 2

 C. 3

 D. 4

Question ID : 4774415519

Status : Answered

Chosen Option : 1

Q.36 If $(16)(3^2) = X(2)^3$, then X =

- a. 81
- b. 18
- c. 72
- d. 16

Ans  A. 1

 B. 2

 C. 3

 D. 4

Question ID : 4774415529

Status : Not Answered

Chosen Option : --

Q.37 One morning after sunrise, Sita and Gita were standing in a chowk in Mumbai with their back towards each other. Sita's shadow fell exactly towards right hand side. Which direction was Gita facing?

- a. East
- b. West
- c. North
- d. South

Ans  A. 1

 B. 2

 C. 3

 D. 4

Question ID : 4774415542

Status : Answered

Chosen Option : 4

Q.38 Identify a relationship between the given words and choose the word having similar relationship from the given choices:

Fission : Fusion :: Flamboyant : _____

- a. Exuberant
- b. Excited
- c. Extinguished
- d. Sad

Ans  A. 1
 B. 2
 C. 3
 D. 4

Question ID : 4774415511

Status : Not Answered

Chosen Option : --

Q.39 Choose the correct order of the sentences marked A, B, C, and D to form a logical paragraph.

- A- The sky was clear with hardly any clouds.
 - B- Then finally descended the dawn.
 - C- Then, I started feeling tired.
 - D- Therefore, first I tried to find constellations in the sky.
- a) ACDB
 - b) BDCA
 - c) ADCB
 - d) CABD

Ans  A. 1
 B. 2
 C. 3
 D. 4

Question ID : 4774415506

Status : Answered

Chosen Option : 3

Q.40 A clock shows 8.30. If the minute hand points to West, in what direction will the hour hand points?

- a. North
- b. South-West
- c. South
- d. North-West

Ans  A. 1
 B. 2
 C. 3
 D. 4

Question ID : 4774415535

Status : Answered

Chosen Option : 2

Q.41 Choose the option that completes the sentence most meaningfully and appropriately:
The army vehicles, weapons and uniform are the color of leaves of plants in order to ----
----- them so that the enemy cannot spot them easily.

- a. decorate
- b. camouflage
- c. adorn
- d. beautify

Ans  A. 1
 B. 2
 C. 3
 D. 4

Question ID : **4774415514**
Status : **Answered**
Chosen Option : **2**

Q.42 Choose the word which is not a similar in meaning of the given word.
Conquer

- a. Triumph
- b. Victorious
- c. Lose
- d. Overpower

Ans  A. 1
 B. 2
 C. 3
 D. 4

Question ID : **4774415520**
Status : **Answered**
Chosen Option : **3**

Q.43 Choose the word which is not a similar in meaning of the given word.
Deplorable

- a. Admirable
- b. Dishonorable
- c. Disgraceful
- d. Unforgiveable

Ans  A. 1
 B. 2
 C. 3
 D. 4

Question ID : **4774415521**
Status : **Answered**
Chosen Option : **1**

Q.44 Identify a relationship between the given words and choose the word having similar relationship from the given choices:

Defunct : Working ::

- a. Obsequious : Sycophantic
- b. Obsolescent : Declining
- c. Obsessed : Preoccupied
- d. Deify : Demonize

Ans  A. 1
 B. 2
 C. 3
 D. 4

Question ID : 4774415513

Status : Answered

Chosen Option : 2

Q.45 Choose the correct order of the sentences marked A, B, C, and D to form a logical paragraph.

- A- "Sugar is the largest industry in my part of the country", he said.
- B- Otherwise, it had been reserved for the cooperatives earlier.
- C- At the same time, it was decontrolled and therefore you could set up a new sugar mill in the private sector.
- D- Now sugar may seem a strange choice but for him it was a fairly natural one.

- a. DABC
- b. DACB
- c. ADBC
- d. ABCD

Ans  A. 1
 B. 2
 C. 3
 D. 4

Question ID : 4774415507

Status : Answered

Chosen Option : 4

Q.46 Fan is related to Wings in the same way as Wheel is related to -----.

- a. Round
- b. Spokes
- c. Cars
- d. Moves

Ans  A. 1
 B. 2
 C. 3
 D. 4

Question ID : 4774415532

Status : Answered

Chosen Option : 3

Q.47 Find the missing term in the following series:

2, 6, 12, 20, 30,, 56

- a. 32
- b. 42
- c. 34
- d. 24

Ans  A. 1
 B. 2
 C. 3
 D. 4

Question ID : 4774415538

Status : Answered

Chosen Option : 2

Q.48 A woman wants to go to a restaurant. If she covers 2 km towards East and after taking turn to South, she covers 1.5 km more to reach the restaurant. How much distance she travels to reach restaurant?

- a. 3 km
- b. 3.5 km
- c. 4 km
- d. 4.5 km

Ans  A. 1
 B. 2
 C. 3
 D. 4

Question ID : 4774415543

Status : Answered

Chosen Option : 2

Q.49 Identify a relationship between the given words and choose the word having similar relationship from the given choices:

Dated: Modern, _____ :: _____

- a. Avarice: Greed
- b. Authentic: True
- c. Dawn: Dusk
- d. Augment: Increase

Ans  A. 1
 B. 2
 C. 3
 D. 4

Question ID : 4774415509

Status : Answered

Chosen Option : 2

Q.50 In a certain code language, 'Ja, Li, Su' means 'They are beautiful', 'Ha, Do, Ja, To' means 'You seem very beautiful', 'Do, Su, Re' means 'They can do' and 'Yun, Sun, Pun ra' means 'How beautiful he is'. In what language which of the following means 'are'?

- a. Ja
- b. Li
- c. Re
- d. Su

Ans  A. 1

 B. 2

 C. 3

 D. 4

Question ID : 4774415549

Status : Answered

Chosen Option : 2

Comprehension:

Answer the next TEN questions on the basis of the information given below on the profitability of sample business entities (in Rs. Crore) in a given year:

Business Entities	Profits	Sales	Dividend	Term Borrowings	Capital
Alpha	200	2000	50	200	800
Beta	100	500	100	100	1000
Gamma	50	500	20	50	200

SubQuestion No : 51

Q.51 In which of the following business entity, the return on investment was lower than the other entities?

- a. Alpha
- b. Beta
- c. Gamma
- d. Can't Say

Ans  A. 1

 B. 2

 C. 3

 D. 4

Question ID : 4774415560

Status : Answered

Chosen Option : 1

Comprehension:

Answer the next TEN questions on the basis of the information given below on the profitability of sample business entities (in Rs. Crore) in a given year:

Business Entities	Profits	Sales	Dividend	Term Borrowings	Capital
Alpha	200	2000	50	200	800
Beta	100	500	100	100	1000
Gamma	50	500	20	50	200

SubQuestion No : 52

Q.52 What is the profitability of sample business entities?

- a. 11.16%
- b. 13.67%
- c. 11.67%
- d. 13.16%

Ans  A. 1
 B. 2
 C. 3
 D. 4

Question ID : 4774415555

Status : Not Answered

Chosen Option : --

Comprehension:

Answer the next TEN questions on the basis of the information given below on the profitability of sample business entities (in Rs. Crore) in a given year:

Business Entities	Profits	Sales	Dividend	Term Borrowings	Capital
Alpha	200	2000	50	200	800
Beta	100	500	100	100	1000
Gamma	50	500	20	50	200

SubQuestion No : 53

Q.53 Based on given information, which company is better placed as to its debt repayment competence?

- a. Alpha
- b. Beta
- c. Gamma
- d. Can't say

Ans  A. 1
 B. 2
 C. 3
 D. 4

Question ID : 4774415559

Status : Answered

Chosen Option : 2

Comprehension:

Answer the next TEN questions on the basis of the information given below on the profitability of sample business entities (in Rs. Crore) in a given year:

Business Entities	Profits	Sales	Dividend	Term Borrowings	Capital
Alpha	200	2000	50	200	800
Beta	100	500	100	100	1000
Gamma	50	500	20	50	200

SubQuestion No : 54

Q.54 In order to break the inertia indicated in information furnished on business profitability, which policy intervention do you call for a large size emerging economy?

- Fiscal intervention
- Monetary intervention
- Pump Priming
- All of these

Ans  A. 1
 B. 2
 C. 3
 D. 4

Question ID : 4774415564

Status : Answered

Chosen Option : 4

Comprehension:

Answer the next TEN questions on the basis of the information given below on the profitability of sample business entities (in Rs. Crore) in a given year:

Business Entities	Profits	Sales	Dividend	Term Borrowings	Capital
Alpha	200	2000	50	200	800
Beta	100	500	100	100	1000
Gamma	50	500	20	50	200

SubQuestion No : 55

Q.55 Based on the said information, in your opinion, which entity is expected to command higher premium on listing on exchanges?

- Alpha
- Beta
- Can't Say
- Gamma

Ans  A. 1
 B. 2
 C. 3
 D. 4

Question ID : 4774415561

Status : Answered

Chosen Option : 2

Comprehension:

Answer the next TEN questions on the basis of the information given below on the profitability of sample business entities (in Rs. Crore) in a given year:

Business Entities	Profits	Sales	Dividend	Term Borrowings	Capital
Alpha	200	2000	50	200	800
Beta	100	500	100	100	1000
Gamma	50	500	20	50	200

SubQuestion No : 56

Q.56 Which of the three business entities enjoyed the highest profitability?

- a. Alpha
- b. Gamma
- c. Beta
- d. Can't say

Ans  A. 1
 B. 2
 C. 3
 D. 4

Question ID : 4774415557

Status : Answered

Chosen Option : 3

Comprehension:

Answer the next TEN questions on the basis of the information given below on the profitability of sample business entities (in Rs. Crore) in a given year:

Business Entities	Profits	Sales	Dividend	Term Borrowings	Capital
Alpha	200	2000	50	200	800
Beta	100	500	100	100	1000
Gamma	50	500	20	50	200

SubQuestion No : 57

Q.57 In your opinion, what could be the reason(s) that warranted Beta entity dole out equal sum as dividend as it borrowed?

- a. Maintain stock price
- b. Tax management
- c. Both (a) and (b)
- d. Neither (a) nor (b)

Ans  A. 1
 B. 2
 C. 3
 D. 4

Question ID : 4774415562

Status : Answered

Chosen Option : 3

Comprehension:

Answer the next TEN questions on the basis of the information given below on the profitability of sample business entities (in Rs. Crore) in a given year:

Business Entities	Profits	Sales	Dividend	Term Borrowings	Capital
Alpha	200	2000	50	200	800
Beta	100	500	100	100	1000
Gamma	50	500	20	50	200

SubQuestion No : 58

Q.58 Which business enjoyed superior debt servicing competence during the given time perspective?

- a. Alpha
- b. Beta
- c. Gamma
- d. Its equal to All

Ans  A. 1

 B. 2

 C. 3

 D. 4

Question ID : 4774415558

Status : **Answered**

Chosen Option : 3

Comprehension:

Answer the next TEN questions on the basis of the information given below on the profitability of sample business entities (in Rs. Crore) in a given year:

Business Entities	Profits	Sales	Dividend	Term Borrowings	Capital
Alpha	200	2000	50	200	800
Beta	100	500	100	100	1000
Gamma	50	500	20	50	200

SubQuestion No : 59

Q.59 The information furnished on the business profitability points which kind of market conditions in an emerging economy like India?

- a. Recovery
- b. Recession
- c. Expansion
- d. Decline

Ans  A. 1

 B. 2

 C. 3

 D. 4

Question ID : 4774415563

Status : **Not Answered**

Chosen Option : --

Comprehension:

Answer the next TEN questions on the basis of the information given below on the profitability of sample business entities (in Rs. Crore) in a given year:

Business Entities	Profits	Sales	Dividend	Term Borrowings	Capital
Alpha	200	2000	50	200	800
Beta	100	500	100	100	1000
Gamma	50	500	20	50	200

SubQuestion No : 60

Q.60 What is the dividend payout of sample companies during given time frame?

- a. 46.52%
- b. 48.57%
- c. 57.42%
- d. 52.18%

Ans  A. 1
 B. 2
 C. 3
 D. 4

Question ID : 4774415556

Status : Not Answered

Chosen Option : --

Q.61 A fruit seller mixes three varieties of grapes costing Rs. 80, Rs. 45 and Rs. 30 per kg. in the ratio of 1 : 4 : 6 in terms of weight and sells the mixture at Rs 50 per kg. What percentage of profit does he make?

- a. 25%
- b. 24%
- c. 30%
- d. 32%

Ans  A. 1
 B. 2
 C. 3
 D. 4

Question ID : 4774415567

Status : Not Answered

Chosen Option : --

Q.62 In a family, each daughter has the same number of brothers as she has sisters and each son has twice as many sisters as he has brothers. How many sons are there in the family?

- a. 4
- b. 2
- c. 3
- d. 5

Ans  **A. 1**
 **B. 2**
 **C. 3**
 **D. 4**

Question ID : 4774415570

Status : **Answered**

Chosen Option : 1

Q.63 A vendor earns a profit of 20% on selling a book at a 16% discount on the printed price. The ratio of the cost price and the printed price is.....

- a. 5 : 6
- b. 7 : 10
- c. 5 : 7
- d. 6 : 12

Ans  **A. 1**
 **B. 2**
 **C. 3**
 **D. 4**

Question ID : 4774415568

Status : **Answered**

Chosen Option : 4

Q.64 What is the number whose twenty fifth part multiplied by its fifth part yield 1125?

- a. 375
- b. 365
- c. 350
- d. 485

Ans  **A. 1**
 **B. 2**
 **C. 3**
 **D. 4**

Question ID : 4774415569

Status : **Not Answered**

Chosen Option : --

Q.65 A, B and C started a business in which A has invested 2 times of B and B has invested 5 times of C. What is the profit share of B in a total profit of Rs. 25600?

- a. Rs. 12000
- b. Rs 8000
- c. Rs 16000
- d. Rs 4000

Ans  A. 1

 B. 2

 C. 3

 D. 4

Question ID : 4774415566

Status : Answered

Chosen Option : 2

Q.66 A and B invest in a business in a ratio of 2:3. If 10% of the total profit goes for donations and if A's share is Rs. 1080, then find the total profit.

- a. Rs. 3000
- b. Rs. 2800
- c. Rs. 2400
- d. Rs. 3200

Ans  A. 1

 B. 2

 C. 3

 D. 4

Question ID : 4774415565

Status : Answered

Chosen Option : 4

Comprehension:**DIRECTIONS for next FIVE questions:**

Classification of 100 students based on the marks obtained (out of 50) by them in Physics and Chemistry in an examination is given below:

	40 and above	30 and above	20 and above	10 and above	zero-and above
Physics	9	32	80	92	100
Chemistry	4	21	66	81	100
Average	7	27	73	87	100

SubQuestion No : 67

Q.67 If atleast 60 percent marks in Physics are required for pursuing higher studies in Physics, how many students will be eligible to pursue higher studies in Physics?

- a. 27
- b. 32
- c. 34
- d. 41

Ans  **A. 1**

 **B. 2**

 **C. 3**

 **D. 4**

Question ID : 4774415573

Status : **Answered**

Chosen Option : 2

Comprehension:**DIRECTIONS for next FIVE questions:**

Classification of 100 students based on the marks obtained (out of 50) by them in Physics and Chemistry in an examination is given below:

	40 and above	30 and above	20 and above	10 and above	zero-and above
Physics	9	32	80	92	100
Chemistry	4	21	66	81	100
Average	7	27	73	87	100

SubQuestion No : 68

Q.68 The number of students scoring less than 40 percent marks in aggregate is

- a. 13
- b. 19
- c. 20
- d. 27

Ans  **A. 1**

 **B. 2**

 **C. 3**

 **D. 4**

Question ID : 4774415575

Status : **Answered**

Chosen Option : 4

Comprehension:**DIRECTIONS** for next FIVE questions:**Classification of 100 students based on the marks obtained (out of 50) by them in Physics and Chemistry in an examination is given below:**



	40 and above	30 and above	20 and above	10 and above	zero-and above
Physics	9	32	80	92	100
Chemistry	4	21	66	81	100
Average	7	27	73	87	100

SubQuestion No : 69

Q.69 If it is known that atleast 23 students were eligible for a Symposium on Chemistry, then the minimum qualifying marks in Chemistry for eligible to Symposium would lie in the range

- a. 40-45
- b. 30-40
- c. 20-30
- d. Below 20

Ans

-  A. 1
-  B. 2
-  C. 3
-  D. 4

Question ID : **4774415576**Status : **Not Answered**

Chosen Option : --

Comprehension:**DIRECTIONS for next FIVE questions:****Classification of 100 students based on the marks obtained (out of 50) by them in Physics and Chemistry in an examination is given below:**

	40 and above	30 and above	20 and above	10 and above	zero-and above
Physics	9	32	80	92	100
Chemistry	4	21	66	81	100
Average	7	27	73	87	100

SubQuestion No : 70

Q.70 The percentage of number of students getting at least 60 percent marks in Chemistry over those getting at least 40 percent marks in aggregate, is approximately

- a. 21%
- b. 27%
- c. 29%
- d. 31%

Ans

- ☒ A. 1
- ☒ B. 2
- ☒ C. 3
- ☒ D. 4

Question ID : 4774415574

Status : Answered

Chosen Option : 4

Comprehension:**DIRECTIONS for next FIVE questions:****Classification of 100 students based on the marks obtained (out of 50) by them in Physics and Chemistry in an examination is given below:**

	40 and above	30 and above	20 and above	10 and above	zero-and above
Physics	9	32	80	92	100
Chemistry	4	21	66	81	100
Average	7	27	73	87	100

SubQuestion No : 71

Q.71 What is the difference between the number of students passed with 30 as cut-off in Chemistry and those passed with 30 as cut off marks in aggregate?

- a. 3
- b. 4
- c. 5
- d. 6

Ans

- ☒ A. 1
- ☒ B. 2
- ☒ C. 3
- ☒ D. 4

Question ID : 4774415572

Status : Answered

Chosen Option : 4

Comprehension:

Solve the next FOUR questions based on the data given below on the Production, Exports and Per Capita Consumption of rice in country for five years from 2012 to 2016:

Year	Production	Exports	Per Capita Consumption
	(in million Kg)	(in million Kg)	(in Kg)
2012	186.5	114	36.25
2013	202	114	35.2
2014	238	130	38.7
2015	221	116	40.5
2016	215	88	42

Where, Per Capita Consumption = (Consumption in million Kg) / (population in million), and

Consumption (in million Kg) = Production – Exports.

SubQuestion No : 72

Q.72 What is population of the country in the year 2014 (in million)?

- a. 2.79
- b. 2.85
- c. 2.64
- d. 2.72

Ans

 A. 1

 B. 2

 C. 3

 D. 4

Question ID : **4774415580**

Status : **Not Answered**

Chosen Option : --

Comprehension:

Solve the next FOUR questions based on the data given below on the Production, Exports and Per Capita Consumption of rice in country for five years from 2012 to 2016:

Year	Production	Exports	Per Capita Consumption
	(in million Kg)	(in million Kg)	(in Kg)
2012	186.5	114	36.25
2013	202	114	35.2
2014	238	130	38.7
2015	221	116	40.5
2016	215	88	42

Where, Per Capita Consumption = (Consumption in million Kg) / (population in million), and





Consumption (in million Kg) = Production – Exports.

SubQuestion No : 73

Q.73 The ratio of Exports to Consumption in the given period was the highest in the year

- a. 2014
- b. 2015
- c. 2012
- d. 2013

Ans

-  A. 1
-  B. 2
-  C. 3
-  D. 4

Question ID : **4774415579**

Status : **Answered**

Chosen Option : 1

Comprehension:

Solve the next FOUR questions based on the data given below on the Production, Exports and Per Capita Consumption of rice in country for five years from 2012 to 2016:

Year	Production	Exports	Per Capita Consumption
	(in million Kg)	(in million Kg)	(in Kg)
2012	186.5	114	36.25
2013	202	114	35.2
2014	238	130	38.7
2015	221	116	40.5
2016	215	88	42

Where, Per Capita Consumption = (Consumption in million Kg) / (population in million), and

Consumption (in million Kg) = Production – Exports.

SubQuestion No : 74

Q.74 In which year, the population of country was the highest?

- a. 2015
- b. 2016
- c. 2013
- d. 2014

Ans  A. 1

 B. 2

 C. 3

 D. 4

Question ID : 4774415578

Status : Answered

Chosen Option : 4

Comprehension:

Solve the next FOUR questions based on the data given below on the Production, Exports and Per Capita Consumption of rice in country for five years from 2012 to 2016:

Year	Production	Exports	Per Capita Consumption
	(in million Kg)	(in million Kg)	(in Kg)
2012	186.5	114	36.25
2013	202	114	35.2
2014	238	130	38.7
2015	221	116	40.5
2016	215	88	42

Where, Per Capita Consumption = (Consumption in million Kg) / (population in million), and

Consumption (in million Kg) = Production – Exports.

SubQuestion No : 75

Q.75 The percentage increase in the consumption of rice over the previous year was the highest in which year?

- a. 2015
- b. 2016
- c. 2013
- d. 2014

Ans

 A. 1

 B. 2

 C. 3

 D. 4

Question ID : **4774415581**

Status : **Answered**

Chosen Option : 1

Comprehension:**Answer the next FIVE questions from the information given below:**

Year	Production (Lakh Tones)	Import (Lakh Tones)	Consumption (Lakh Tones)	Cost of Import (Rs. Crore)
2000-01	90	20	110	645
2001-02	85	31	116	1540
2002-03	90	35	125	1336
2003-04	98	28	126	1935
2004-05	97	25	122	2220

SubQuestion No : 76**Q.76** During which of the following years did the production contribute the highest percentage to meet the consumption?

- a. 2000-01
- b. 2002-03
- c. 2001-02
- d. 2003-04

Ans  **A. 1** **B. 2** **C. 3** **D. 4**Question ID : **4774415587**Status : **Answered**Chosen Option : **4****Comprehension:****Answer the next FIVE questions from the information given below:**

Year	Production (Lakh Tones)	Import (Lakh Tones)	Consumption (Lakh Tones)	Cost of Import (Rs. Crore)
2000-01	90	20	110	645
2001-02	85	31	116	1540
2002-03	90	35	125	1336
2003-04	98	28	126	1935
2004-05	97	25	122	2220

SubQuestion No : 77**Q.77** The total production during the year 2002-03 was what percentage of that of consumption?

- a. 54 per cent
- b. 72 per cent
- c. 72 per cent
- d. 80 per cent

Ans  **A. 1** **B. 2** **C. 3** **D. 4**Question ID : **4774415586**Status : **Not Answered**Chosen Option : **--**

Comprehension:**Answer the next FIVE questions from the information given below:**

Year	Production (Lakh Tones)	Import (Lakh Tones)	Consumption (Lakh Tones)	Cost of Import (Rs. Crore)
2000-01	90	20	110	645
2001-02	85	31	116	1540
2002-03	90	35	125	1336
2003-04	98	28	126	1935
2004-05	97	25	122	2220

SubQuestion No : 78**Q.78** What was the cost of imports per ton during year 2004-05?

- a. Rs. 8080
- b. Rs. 28, 880
- c. Rs. 8,880
- d. Rs. 80,080

Ans  **A. 1** **B. 2** **C. 3** **D. 4**Question ID : **4774415585**Status : **Answered**Chosen Option : **3**

Comprehension:**Answer the next FIVE questions from the information given below:**

Year	Production (Lakh Tones)	Import (Lakh Tones)	Consumption (Lakh Tones)	Cost of Import (Rs. Crore)
2000-01	90	20	110	645
2001-02	85	31	116	1540
2002-03	90	35	125	1336
2003-04	98	28	126	1935
2004-05	97	25	122	2220

SubQuestion No : 79**Q.79** During which of the following years did import register the largest increase in the quantity over the previous year?

- a. 2000-01
- b. 2002-03
- c. 2001-02
- d. 2003-04

Ans  A. 1

 B. 2

 C. 3

 D. 4

Question ID : 4774415584

Status : Answered

Chosen Option : 2

Comprehension:**Answer the next FIVE questions from the information given below:**

Year	Production (Lakh Tones)	Import (Lakh Tones)	Consumption (Lakh Tones)	Cost of Import (Rs. Crore)
2000-01	90	20	110	645
2001-02	85	31	116	1540
2002-03	90	35	125	1336
2003-04	98	28	126	1935
2004-05	97	25	122	2220

SubQuestion No : 80**Q.80** What was the ratio of production to imports in the year 2003-04?

- a. 7:9
- b. 9:7
- c. 9:2
- d. 7:2

Ans  A. 1

 B. 2

 C. 3

 D. 4

Question ID : 4774415583

Status : Answered

Chosen Option : 4

Comprehension:

Answer the next FIVE questions from the information given below on the production (in Tonnes) of four crops during the period 1997-2000:

Year	Wheat	Rice	Sugarcane	Pulses
1997	100	91	15	71
1998	120	88	18	75
1999	125	97	21	79
2000	131	107	25	88

SubQuestion No : 81

Q.81 The average annual growth rate of wheat production during the given period is

- a. 31
- b. 43.67
- c. 9.66
- d. 93

Ans  A. 1
 B. 2
 C. 3
 D. 4

Question ID : 4774415592

Status : Answered

Chosen Option : 1

Comprehension:

Answer the next FIVE questions from the information given below on the production (in Tonnes) of four crops during the period 1997-2000:

Year	Wheat	Rice	Sugarcane	Pulses
1997	100	91	15	71
1998	120	88	18	75
1999	125	97	21	79
2000	131	107	25	88

SubQuestion No : 82

Q.82 What would be the actual production of wheat in 2001, if the growth rate in the year 2001 is the same the average annual growth rate for the given period?

- a. 171.61
- b. 143.65
- c. 110.33
- d. None of these

Ans  A. 1
 B. 2
 C. 3
 D. 4

Question ID : 4774415593

Status : Answered

Chosen Option : 4

Comprehension:

Answer the next FIVE questions from the information given below on the production (in Tonnes) of four crops during the period 1997-2000:

Year	Wheat	Rice	Sugarcane	Pulses
1997	100	91	15	71
1998	120	88	18	75
1999	125	97	21	79
2000	131	107	25	88

SubQuestion No : 83

Q.83 The production of pulses in 1998 is what percent of total production of rice during the given period?

- a. 19.58
- b. 85.23
- c. 81.72
- d. 28.12

Ans  A. 1

 B. 2

 C. 3

 D. 4

Question ID : 4774415590

Status : Answered

Chosen Option : 2

Comprehension:

Answer the next FIVE questions from the information given below on the production (in Tonnes) of four crops during the period 1997-2000:

Year	Wheat	Rice	Sugarcane	Pulses
1997	100	91	15	71
1998	120	88	18	75
1999	125	97	21	79
2000	131	107	25	88

SubQuestion No : 84

Q.84 By what percent is the average wheat production more than the average sugarcane production in the given period?

- a. 19.90
- b. 502.53
- c. 167.67
- d. 83.40

Ans  A. 1

 B. 2

 C. 3

 D. 4

Question ID : 4774415591

Status : Answered

Chosen Option : 2

Comprehension:

Answer the next FIVE questions from the information given below on the production (in Tonnes) of four crops during the period 1997-2000:

Year	Wheat	Rice	Sugarcane	Pulses
1997	100	91	15	71
1998	120	88	18	75
1999	125	97	21	79
2000	131	107	25	88

SubQuestion No : 85

Q.85 Which crop witnessed the highest growth rate in production during the given period?

- a. Sugarcane
- b. Wheat
- c. Pulses
- d. Rice

Ans  **A. 1**

 **B. 2**

 **C. 3**

 **D. 4**

Question ID : **4774415589**

Status : **Answered**

Chosen Option : **2**

Q.86 Mission Indradhanush is designed to

- a. Vaccinate all children against seven common diseases
- b. Ensure timely supply of water for farm operations
- c. Opening public health centers in rural areas
- d. Ensure equal rights for the LGBTQ community

Ans  **A. 1**

 **B. 2**

 **C. 3**

 **D. 4**

Question ID : **4774415595**

Status : **Not Answered**

Chosen Option : **--**

Q.87 Which of the following was most probably the first metal to be used in India?

- a. Iron
- b. Gold
- c. Copper
- d. Silver

Ans  A. 1

 B. 2

 C. 3

 D. 4

Question ID : **4774415605**

Status : **Answered**

Chosen Option : 1

Q.88 Which of the following is greenhouse gas?

- a. Carbon monoxide
- b. Sulphur dioxide
- c. Carbon dioxide
- d. Oxygen

Ans  A. 1

 B. 2

 C. 3

 D. 4

Question ID : **4774415594**

Status : **Answered**

Chosen Option : 4

Q.89 Which of the following is a large blood vessel that carries blood away from the heart?

- a. Vein
- b. Artery
- c. Capillary
- d. Nerve

Ans  A. 1

 B. 2

 C. 3

 D. 4

Question ID : **4774415600**

Status : **Answered**

Chosen Option : 2

Q.90 Kaziranga national park is located in which state?

- a. Gujarat
- b. Kerala
- c. Rajasthan
- d. Assam

Ans  A. 1
 B. 2
 C. 3
 D. 4

Question ID : 4774415598

Status : Answered

Chosen Option : 2

Q.91 'Natya- Shastra' the main source of India's classical dances was written by

- a. Nara Muni
- b. Abhinav Gupt
- c. Bharat Muni
- d. Tandu Muni

Ans  A. 1
 B. 2
 C. 3
 D. 4

Question ID : 4774415608

Status : Not Answered

Chosen Option : --

Q.92 Who is the author of the book 'A Brief History of Time'?

- a. Michael Green
- b. Stephen Hawking
- c. Noamha Hirari
- d. Carl Sagan

Ans  A. 1
 B. 2
 C. 3
 D. 4

Question ID : 4774415603

Status : Not Answered

Chosen Option : --

Q.93 The ratio of width of our national Flag to its length is

- a. 3:5
- b. 2:3
- c. 2:4
- d. 3:4

Ans  A. 1
 B. 2
 C. 3
 D. 4

Question ID : 4774415607
Status : Not Answered
Chosen Option : --

Q.94 Which organ of the body produces the fluid known as bile?

- a. Liver
- b. Gall bladder
- c. Pancreas
- d. Kidney

Ans  A. 1
 B. 2
 C. 3
 D. 4

Question ID : 4774415604
Status : Answered
Chosen Option : 4

Q.95 The five-nation group BRICS has established its own developmental bank called?

- a. BRICS Development bank
- b. The Bank
- c. BRICS Bank
- d. New Development Bank

Ans  A. 1
 B. 2
 C. 3
 D. 4

Question ID : 4774415596
Status : Answered
Chosen Option : 1

Q.96 Mahatma Gandhi launched Kheda Satyagrah in Gujrat in 1918 to support the cause of:

- a. Mill owners
- b. Land lords
- c. The peasants
- d. Textile workers

Ans  A. 1
 B. 2
 C. 3
 D. 4

Question ID : 4774415601

Status : Answered

Chosen Option : 3

Q.97 'Higher than Hopes' is a biography of

- a. Mother Teresa
- b. Bishop Tutu
- c. Nelson Mandela
- d. Mahatma Gandhi

Ans  A. 1
 B. 2
 C. 3
 D. 4

Question ID : 4774415599

Status : Answered

Chosen Option : 3

Q.98 Which of the following mobile apps has been launched by the 'Google' to help children in primary schools to learn and read in Hindi and English?

- a. Kaho
- b. Bolo
- c. Chalo
- d. Padho

Ans  A. 1
 B. 2
 C. 3
 D. 4

Question ID : 4774415597

Status : Answered

Chosen Option : 2

Q.99 The famous 'Hornbill festival' is celebrated in which of the following states of India?

- a. Nagaland
- b. Assam
- c. Mizoram
- d. Meghalaya

Ans  **A. 1**

 **B. 2**

 **C. 3**

 **D. 4**

Question ID : **4774415606**

Status : **Answered**

Chosen Option : **1**

Q.100 Which of the following mountain passes from the 'tri-junction' of India, China and Myanmar?

- a. Nathu La
- b. Jelep La
- c. Bomdi La
- d. Diphu

Ans  **A. 1**

 **B. 2**

 **C. 3**

 **D. 4**

Question ID : **4774415602**

Status : **Answered**

Chosen Option : **1**