



## Guru Gobind Singh Indraprastha University

[Established by the Govt. of NCT of Delhi]

Participant ID	111252827118
Participant Name	HARSHIT ARORA
Test Center Name	Indraprastha Public School
Test Date	29/08/2021
Test Time	8:00 AM - 10:30 AM
Subject	BBA and Allied Programmes

### Section : English Language & Comprehension

Q.1

**Change the word 'bold' into a verb**

(a) **Boldly**

(b) **Boldness**

(c) **Embolden**

(d) **Bolder**

Ans ☒ A. 1  
☒ B. 2  
☒ C. 3  
☒ D. 4

Question ID : 2233951407

Status : **Answered**

Chosen Option : **B**

Q.2

**Choose the correct antonym for the given word****Intentional**

- (a) Deliberate**
- (b) Accidental**
- (c) Purposeful**
- (d) Capricious**

Ans  A. 1  
 B. 2  
 C. 3  
 D. 4

Question ID : 2233951404

Status : Answered

Chosen Option : B

Q.3

**She broke the glass \_\_\_\_\_ many pieces.**

- (a) into**
- (b) in**
- (c) to**
- (d) from**

Ans  A. 1  
 B. 2  
 C. 3  
 D. 4

Question ID : 2233951425

Status : Answered

Chosen Option : A

Q.4

Give one word for- The custom or practice of having more than one husband at same time

- (a) Polygyny
- (b) Polyphony
- (c) Polyandry
- (d) Polychromy

Ans  A. 1  
 B. 2  
 C. 3  
 D. 4

Question ID : 2233951408

Status : Not Attempted and  
Marked For Review

Chosen Option : --

Q.5

To err is \_\_\_\_\_, to forgive is divine.

- (a) Terror
- (b) Sin
- (c) Satanic
- (d) Human

Ans  A. 1  
 B. 2  
 C. 3  
 D. 4

Question ID : 2233951419

Status : Answered

Chosen Option : B

Q.6

**Identify the correctly spelt word:**

- (a) Surveillance**
- (b) Surveilance**
- (c) Surveilence**
- (d) Surveilance**

Ans  A. 1 B. 2 C. 3 D. 4

Question ID : 2233951410

Status : Answered

Chosen Option : B

Q.7

**Select the correctly punctuated sentence.**

- (a) My friend who retires this year wants to live in Italy, or Mexico**
- (b) My friend, who retires this year, wants to live in Italy or Mexico.**
- (c) My friend who retires this year wants to live, in Italy, or Mexico.**
- (d) My friend, who retires this year, wants to live, in Italy or Mexico.**

Ans  A. 1 B. 2 C. 3 D. 4

Question ID : 2233951415

Status : Answered

Chosen Option : B

**Q.8** Read the passage and answer the question that follows

Policymakers must confront the dilemma that fossil fuels continue to be an indispensable source of energy even though burning them produces atmospheric accumulations of carbon dioxide that increase the likelihood of potentially disastrous global climate change. Currently, technology that would capture carbon dioxide emitted by power plants and sequester it harmlessly underground or undersea instead of releasing it into the atmosphere might double the cost of generating electricity. But because sequestration does not affect the cost of electricity transmission and distribution, delivered prices will rise less, by no more than 50 percent. Research into better technologies for capturing carbon dioxide will undoubtedly lead to lowered costs.

The passage implies which of the following about the current cost of generating electricity?

- A. It is higher than it would be if better technologies for capturing carbon dioxide were available.
  - B. It is somewhat less than the cost of electricity transmission and distribution.
  - C. It constitutes half of the delivered price of electricity.
  - D. It is dwelt on by policymakers to the exclusion of other costs associated with electricity delivery.
- (a) B  
(b) C  
(c) A  
(d) None of the above

Ans  A. 1  
 B. 2  
 C. 3  
 D. 4

Question ID : 2233951402  
Status : Answered  
Chosen Option : B

**Q.9** Out of the four alternatives suggested, select one which best expresses the same sentence in passive/ active voice.

The burglar destroyed several items in the room. Even the carpet has been torn.

- (a) Several items were destroyed in the room by the burglar. Even the carpet was torn.
- (b) Several items were destroyed by the burglar. Even the carpet was torn in the room.
- (c) Including the carpet, several items in the room have been torn by the burglar.
- (d) The burglar, being destroyed several items in the room, also carpet has torn.

Ans  A. 1  
 B. 2  
 C. 3  
 D. 4

Question ID : 2233951423  
Status : Answered  
Chosen Option : C

Q.10

Choose the statement(s) where the underlined word is used correctly:

- A. A prone is a dried plum.
- B. He was lying prone on the floor.
- C. People who eat a lot of fat are prone to heart disease.
- D. He is rather prone to making tactless remarks.

- (a) BCD
- (b) ABC
- (c) DCA
- (d) ABD

Ans  A. 1 B. 2 C. 3 D. 4

Question ID : 2233951405

Status : Answered

Chosen Option : A

Q.11

Identify the type of sentence: It was Sam who paid for the drinks.

- (a) Simple sentence
- (b) Complex sentence
- (c) Compound sentence
- (d) Interrogative sentence

Ans  A. 1 B. 2 C. 3 D. 4

Question ID : 2233951414

Status : Answered

Chosen Option : B

Q.12

Identify the correct idiom -When my dad bought me a computer, I was on cloud \_\_\_\_\_.

- (a) Five
- (b) Nine
- (c) Twice
- (d) Seven

Ans  A. 1  
 B. 2  
 C. 3  
 D. 4

Question ID : 2233951411

Status : Answered

Chosen Option : D

Q.13

The speaker expressed his \_\_\_\_\_ to his senior's \_\_\_\_\_ for insulting his subordinates.

- (a) Interest, Interest
- (b) Liking, Desire
- (c) Aversion, Penchant
- (d) Views, Duty

Ans  A. 1  
 B. 2  
 C. 3  
 D. 4

Question ID : 2233951418

Status : Answered

Chosen Option : C

Q.14

In the question, four words are given, of which two words are most nearly the same in meaning. Mark the correct answer.

- A. Hectic
- B. Risky
- C. Perilous
- D. Stunning

- (a) AD
- (b) BC
- (c) BD
- (d) CD

Ans  A. 1  
 B. 2  
 C. 3  
 D. 4

Question ID : 2233951406

Status : Answered

Chosen Option : A

Q.15

Choose the correct synonym of the given word.

**Gross**

- (a) Common
- (b) Shameless
- (c) Angry
- (d) Sincere

Ans  A. 1  
 B. 2  
 C. 3  
 D. 4

Question ID : 2233951422

Status : Answered

Chosen Option : B



Q.16

Choose the option which gives the correct meaning for the given idiom

**A chip off the old block**

- (a) Retaining inconsistencies of an earlier order.
- (b) Someone who is very similar in character to their father or mother
- (c) Presenting nothing novel or creative
- (d) Being orthodox or traditional

Ans  A. 1  
 B. 2  
 C. 3  
 D. 4

Question ID : 2233951403

Status : Answered

Chosen Option : D

Q.17

**A row boat needs more than one \_\_\_\_.**

- (a) oar
- (b) ore
- (c) ode
- (d) odd

Ans  A. 1  
 B. 2  
 C. 3  
 D. 4

Question ID : 2233951413

Status : Answered

Chosen Option : A

Q.18

Although the fossils were well preserved, palaeontologists were unable to \_\_\_\_\_ the identity of the mammal species.

- (a) Display
- (b) Ascertain
- (c) Violate
- (d) Embellish

Ans  A. 1  
 B. 2  
 C. 3  
 D. 4

Question ID : 2233951401

Status : Answered

Chosen Option : D

Q.19

Identify the underlined word in the sentence- 'Kolkata is an old city.'

- (a) Noun
- (b) Pronoun
- (c) Adjective
- (d) Adverb

Ans  A. 1  
 B. 2  
 C. 3  
 D. 4

Question ID : 2233951409

Status : Answered

Chosen Option : C

Q.20

Change the speech.

She said to her mother, "Please increase my pocket money."

- (a) She told her mother, "Please increase the pocket money."
- (b) She pleased her mother to increase my pocket money.
- (c) She requested her mother to increase her pocket money.
- (d) She asked her mother to increase her pocket money.

Ans  A. 1  
 B. 2  
 C. 3  
 D. 4

Question ID : 2233951417

Status : Answered

Chosen Option : C

Q.21

**Change the voice in the given sentence below:**

**Has a dog ever bitten you?**

**(a) Have you ever being bitten by a dog?**

**(b) Are you bitten by a dog?**

**(c) Have you ever been bitten by a dog?**

**(d) Has a dog ever bites you?**

**Ans**  **A. 1**

 **B. 2**

 **C. 3**

 **D. 4**

Question ID : **2233951412**

Status : **Answered**

Chosen Option : **C**

Q.22

**Write a one word substitution for**

**Ability to understand and share the feelings of others**

**(a) Sympathy**

**(b) Apathy**

**(c) Pithy**

**(d) Empathy**

**Ans**  **A. 1**

 **B. 2**

 **C. 3**

 **D. 4**

Question ID : **2233951421**

Status : **Not Attempted and  
Marked For Review**

Chosen Option : **--**

Q.23

A person who has an urge to steal but without any intention of profit is called.

- (a) Claustrophobic
- (b) Kleptomaniac
- (c) Pluviophile
- (d) Agoraphobic

Ans  A. 1  
 B. 2  
 C. 3  
 D. 4

Question ID : 2233951424

Status : Not Attempted and  
Marked For Review

Chosen Option : --

Q.24

Rearrange the following parts in proper sequence to obtain a correct sentence.

1. be, not what
2. Always be
3. whom you want to
4. others want to see

- (a) 1, 2, 4, 3
- (b) 3, 4, 2, 1
- (c) 2, 3, 1, 4
- (d) 4, 3, 1, 2

Ans  A. 1  
 B. 2  
 C. 3  
 D. 4

Question ID : 2233951416

Status : Answered

Chosen Option : C

Q.25

Choose the correct plural form of the word Cello

- (a) Cellos
- (b) Celli
- (c) Cellos
- (d) None of the above

Ans  A. 1  
 B. 2  
 C. 3  
 D. 4

Question ID : 2233951420  
Status : Answered  
Chosen Option : D

Section : General Awareness

Q.1

In which category did Chanu Saikhom Mirabai win the Silver medal in weight lifting in the Tokyo Olympics, 2021?

- (a) 44 Kg
- (b) 49 Kg
- (c) 55 Kg
- (d) 67 Kg

Ans  A. 1  
 B. 2  
 C. 3  
 D. 4

Question ID : 2233951447  
Status : Answered  
Chosen Option : C

Q.2

**What does the abbreviation SEBI stand for?**

- (a) Secret Examination Bureau of Investigation**
- (b) Securities Exchange Board of India**
- (c) Sustainable Environment Board of Industries**
- (d) Social and Economic Betterment Initiative**

Ans  A. 1  
 B. 2  
 C. 3  
 D. 4

Question ID : 2233951431

Status : Answered

Chosen Option : A

Q.3

**Which of the following has become the first Gulf country to open embassy in Israel?**

- (a) Bahrain**
- (b) Kuwait**
- (c) UAE**
- (d) Oman**

Ans  A. 1  
 B. 2  
 C. 3  
 D. 4

Question ID : 2233951428

Status : Not Attempted and  
Marked For Review

Chosen Option : --

Q.4

**‘A House for Mr. Biswas’ is a famous novel**

- (a) Homi K. Bhabha**
- (b) V.S. Naipaul**
- (c) Gayatri Chakravorty**
- (d) Mahasweta Devi**

Ans  A. 1  
 B. 2  
 C. 3  
 D. 4

Question ID : 2233951441

Status : **Not Attempted and  
Marked For Review**

Chosen Option : --

Q.5

**QUAD group consists of**

- (a) India, USA, Australia and Japan**
- (b) India, Russia, China, Australia**
- (c) India, Australia, Singapore, Canada**
- (d) India, France, USA, Germany**

Ans  A. 1  
 B. 2  
 C. 3  
 D. 4

Question ID : 2233951437

Status : **Not Attempted and  
Marked For Review**

Chosen Option : --

Q.6

**‘Azadi Ka Amrit Mahotsav’ was launched to commemorate 91 years of**

- (a) Champaran Satyagraha**
- (b) Non Cooperation Movement**
- (c) Dandi March**
- (d) Quit India Movement**

Ans  A. 1  
 B. 2  
 C. 3  
 D. 4

Question ID : **2233951439**  
Status : **Answered**  
Chosen Option : **D**

Q.7

**Facebook launched a new publishing tool called**

- (a) Newz**
- (b) Publisher**
- (c) Channel**
- (d) Bulletin**

Ans  A. 1  
 B. 2  
 C. 3  
 D. 4

Question ID : **2233951438**  
Status : **Answered**  
Chosen Option : **C**



Q.8

**What is the state Animal of Sikkim?**

- (a) Stag
- (b) Reindeer
- (c) Red Panda
- (d) Flying Fox

Ans  A. 1  
 B. 2  
 C. 3  
 D. 4

Question ID : **2233951448**  
Status : **Answered**  
Chosen Option : **B**

Q.9

**Who was appointed as the first Vice Chancellor of the Delhi Sports University**

- (a) Karnam Malleswari
- (b) P. T. Usha
- (c) Sarla Maheswari
- (d) Sania Mirza

Ans  A. 1  
 B. 2  
 C. 3  
 D. 4

Question ID : **2233951432**  
Status : **Not Attempted and  
Marked For Review**  
Chosen Option : --

Q.10

**'Dehing' in the Dehing Patkai Wildlife Sanctuary in Assam is**

- (a) The name of a mountain
- (b) The name of a river
- (c) The name of a dam
- (d) The name of a local leader

Ans  A. 1  
 B. 2  
 C. 3  
 D. 4

Question ID : 2233951426  
Status : Answered  
Chosen Option : B

Q.11

**Which of the following is the official name of Indian variant of Covid 19 virus?**

- (a) Covid-19 Delta Plus
- (b) Covid-19 Delta
- (c) Covid-21 Delta
- (d) Covid-Delta

Ans  A. 1  
 B. 2  
 C. 3  
 D. 4

Question ID : 2233951430  
Status : Answered  
Chosen Option : A

Q.12

**The serving term of a member of the Rajya Sabha is**

- (a) 4 years
- (b) 5 years
- (c) 6years
- (d) 7 years

Ans  A. 1  
 B. 2  
 C. 3  
 D. 4

Question ID : 2233951450  
Status : Not Attempted and  
Marked For Review  
Chosen Option : --

Q.13

**Who is the author of the Harry Potter Series?**

- (a) Roald Dahl**
- (b) J.K. Rowling**
- (c) Enid Blyton**
- (d) Stephenie Meyer**

Ans  A. 1  
 B. 2  
 C. 3  
 D. 4

Question ID : **2233951442**  
Status : **Answered**  
Chosen Option : **C**

Q.14

**Which of the following best described 'laissez-faire' economy**

- (a) Socialist Economy**
- (b) Free market enterprise**
- (c) State controlled**
- (d) Dirigisme**

Ans  A. 1  
 B. 2  
 C. 3  
 D. 4

Question ID : **2233951446**  
Status : **Not Attempted and  
Marked For Review**  
Chosen Option : **--**

Q.15

**Ngultrum is the currency**

- (a) Nepal**
- (b) Tibet**
- (c) Mongolia**
- (d) Bhutan**

Ans  A. 1  
 B. 2  
 C. 3  
 D. 4

Question ID : **2233951436**Status : **Answered**Chosen Option : **C**

Q.16

**The current Prime Minister of New Zealand is**

- (a) Jacinda Ardern**
- (b) Angela Merkel**
- (c) Scott Morrison**
- (d) Kamal Harris**

Ans  A. 1  
 B. 2  
 C. 3  
 D. 4

Question ID : **2233951445**Status : **Answered**Chosen Option : **C**

Q.17

Savari, Ghumara, Painka and Munari are the folk dances of

- (a) Tamil Nadu
- (b) Assam
- (c) Chhatishgarh
- (d) Odisha

Ans  A. 1  
 B. 2  
 C. 3  
 D. 4

Question ID : 2233951435

Status : Answered

Chosen Option : B

Q.18

Manduadih railway station renamed as \_\_\_\_\_ railway station.

- (a) Sardar Patil Railway Station
- (b) Narendra Modi Railway Station
- (c) Banaras Railway Station
- (d) Utkal Railway Station

Ans  A. 1  
 B. 2  
 C. 3  
 D. 4

Question ID : 2233951429

Status : Not Attempted and  
Marked For Review

Chosen Option : --

Q.19

Which state has become the first rabies free- state in India?

- (a) Delhi
- (b) Goa
- (c) Kerala
- (d) Maharashtra

Ans  A. 1  
 B. 2  
 C. 3  
 D. 4

Question ID : 2233951444


Status : Answered

Chosen Option : B

Q.20

**Rajatarangini (River of Kings) is an account of the history of**

- (a) Madhya Pradesh**
- (b) Rajasthan**
- (c) Delhi**
- (d) Kashmir**

Ans  A. 1  
 B. 2  
 C. 3  
 D. 4

Question ID : 2233951440  
Status : **Answered**  
Chosen Option : **B**

Q.21

**'Good Friday' is**

- (a) The last Friday of the Christian Calendar**
- (b) The day marking the crucifixion of Christ**
- (c) The first Friday of the Christian Calendar**
- (d) The day marking the birth of Christ**

Ans  A. 1  
 B. 2  
 C. 3  
 D. 4

Question ID : 2233951449  
Status : **Answered**  
Chosen Option : **C**

Q.22

**Rickets is caused by lack of**

- (a) Vitamin C**
- (b) Vitamin D**
- (c) Carbohydrates**
- (d) Iron**

Ans  A. 1  
 B. 2  
 C. 3  
 D. 4

Question ID : 2233951434

Status : Answered

Chosen Option : C

Q.23

**‘The Jungle Book’ was written by \_\_\_\_.**

- (a) Samuel Richardson**
- (b) Oscar Wilde**
- (c) Benjamin Disraeli**
- (d) Rudyard Kipling**

Ans  A. 1  
 B. 2  
 C. 3  
 D. 4

Question ID : 2233951443

Status : Not Attempted and  
Marked For Review

Chosen Option : --

Q.24

**Milkha Singh, who died recently was famously known as the**

- (a) Run machine
- (b) Super Sikh
- (c) Flying Sikh
- (d) Sprint king

Ans  A. 1  
 B. 2  
 C. 3  
 D. 4

Question ID : **2233951433**  
Status : **Answered**  
Chosen Option : **C**

Q.25

**Who has launched an experiential learning portal for Cricket coaching named CRICURU?**

- (a) Kapil Dev
- (b) VVS Laxman
- (c) Sachin Tendulkar
- (d) Virender Sehwag

Ans  A. 1  
 B. 2  
 C. 3  
 D. 4

Question ID : **2233951427**  
Status : **Answered**  
Chosen Option : **B**

Section : Logical and Analytical Ability



Q.1

The following table mentions production of various fruits and its consumptions. Answer the following question according to the details given in the table.

Fruit Varieties	Production in Tonnes	Country 1	Country 2	Domestic Consumption	Export
Apple	196,000	124,727	71,273	130,667	65,333
Orange	280,000	124,444	155,556	200,000	80,000
Banana	105,000	65,625	39,375	70,000	35,000
Strawberry	126,000	75,600	50,400	67,200	58,800
Papaya	210,000	95,455	114,545	100,000	110,000
Jack Fruit	126,000	50,400	75,600	70,000	56,000

What is the difference between Maximum value of Domestic consumption and the Maximum value of Export?

- (a) 80,000
- (b) 90,000
- (c) 60,000
- (d) 70,000

Ans  A. 1 B. 2 C. 3 D. 4

Question ID : 2233951457

Status : Answered

Chosen Option : B

Q.2

The following table mentions production of various fruits and its consumptions. Answer the following question according to the details given in the table.

Fruit Varieties	Production in Tonnes	Country 1	Country 2	Domestic Consumption	Export
Apple	196,000	124,727	71,273	130,667	65,333
Orange	280,000	124,444	155,556	200,000	80,000
Banana	105,000	65,625	39,375	70,000	35,000
Strawberry	126,000	75,600	50,400	67,200	58,800
Papaya	210,000	95,455	114,545	100,000	110,000
Jack Fruit	126,000	50,400	75,600	70,000	56,000

What is the difference between Maximum value of Country 1 Production and the Maximum value of Country 2 Production?

- (a) 28,782
- (b) 30,828
- (c) 32,578
- (d) 29,543

Ans  A. 1 B. 2 C. 3 D. 4

Question ID : 2233951459

Status : Answered

Chosen Option : B

Q.3

The following table mentions production of various fruits and its consumptions. Answer the following question according to the details given in the table.

Fruit Varieties	Production in Tonnes	Country 1	Country 2	Domestic Consumption	Export
Apple	196,000	124,727	71,273	130,667	65,333
Orange	280,000	124,444	155,556	200,000	80,000
Banana	105,000	65,625	39,375	70,000	35,000
Strawberry	126,000	75,600	50,400	67,200	58,800
Papaya	210,000	95,455	114,545	100,000	110,000
Jack Fruit	126,000	50,400	75,600	70,000	56,000

Which Fruit has the highest number of Domestic consumption?

- (a) Orange
- (b) Banana
- (c) Strawberry
- (d) Apple

Ans  A. 1

 B. 2

 C. 3

 D. 4

Question ID : 2233951462

Status : Answered

Chosen Option : A

Q.4

The following table mentions production of various fruits and its consumptions. Answer the following question according to the details given in the table.

Fruit Varieties	Production in Tonnes	Country 1	Country 2	Domestic Consumption	Export
Apple	196,000	124,727	71,273	130,667	65,333
Orange	280,000	124,444	155,556	200,000	80,000
Banana	105,000	65,625	39,375	70,000	35,000
Strawberry	126,000	75,600	50,400	67,200	58,800
Papaya	210,000	95,455	114,545	100,000	110,000
Jack Fruit	126,000	50,400	75,600	70,000	56,000

What is the Percentage of Export in the overall Production?

- (a) 37.64%
- (b) 38.84%
- (c) 36.44%
- (d) 39.24%

Ans  A. 1

 B. 2

 C. 3

 D. 4

Question ID : 2233951455

Status : Answered

Chosen Option : D

Q.5

**Directions: Study the following questions carefully and choose the right answer:**  
**Statement : Do not lean out of the window of the bus - a warning in a school bus.**  
**Assumptions:**

- I. Leaning out of a running bus is dangerous.**  
**II. Children do not pay any heed to such warnings.**

- (a) if only assumption I is implicit  
(b) if only assumption II is implicit  
(c) if either I or II is implicit  
(d) if neither I nor II is implicit

Ans  A. 1 B. 2 C. 3 D. 4

Question ID : 2233951453

Status : Answered

Chosen Option : A

Q.6

**If MOBILITY is coded as 46293927, then EXAMINATION is coded as \_\_\_\_\_.**

- (a) 45038401854  
(b) 56149512965  
(c) 57159413955  
(d) 67250623076

Ans  A. 1 B. 2 C. 3 D. 4

Question ID : 2233951466

Status : Answered

Chosen Option : B

Q.7

Choose the correct order of the sentences marked A, B, C and D to form a logical paragraph.

- A. Along with Raj Kapoor and Dev Anand
- B. Born as Mohammad Yusuf Khan in Peshawar in 1922 in the home of a fruit merchant
- C. He went on to enjoy a career in the movies spanning five decades, blessed with a longevity enjoyed by few of his contemporaries.
- D. The reigning triumvirate of post-Independence Hindi cinema, Dilip Kumar's oeuvre reflects the social and political cross-currents of modern India.
- (a) BCAD
- (b) BCDA
- (c) DABC
- (d) CDAB

Ans  A. 1

 B. 2

 C. 3

 D. 4

Question ID : 2233951468

Status : Answered

Chosen Option : C

Q.8

The following table mentions production of various fruits and its consumptions. Answer the following question according to the details given in the table.

Fruit Varieties	Production in Tonnes	Country 1	Country 2	Domestic Consumption	Export
Apple	196,000	124,727	71,273	130,667	65,333
Orange	280,000	124,444	155,556	200,000	80,000
Banana	105,000	65,625	39,375	70,000	35,000
Strawberry	126,000	75,600	50,400	67,200	58,800
Papaya	210,000	95,455	114,545	100,000	110,000
Jack Fruit	126,000	50,400	75,600	70,000	56,000

The ratio of Jack Fruit produced for Domestic consumption to Apple produced for Export is

- (a) (70000:65334)
- (b) (70000:65333)
- (c) (70003:65333)
- (d) (70003:65334)

Ans  A. 1

 B. 2

 C. 3

 D. 4

Question ID : 2233951463

Status : Answered

Chosen Option : B

Q.9

Angkor Wat is related to Cambodia in the same way as Borobudur is related to

- (a) Malaysia
- (b) Indonesia
- (c) Afghanistan
- (d) Myanmar

Ans  A. 1

 B. 2

 C. 3

 D. 4

Question ID : 2233951451

Status : **Not Attempted and Marked For Review**

Chosen Option : --

Q.10

The following table mentions production of various fruits and its consumptions. Answer the following question according to the details given in the table.

Fruit Varieties	Production in Tonnes	Country 1	Country 2	Domestic Consumption	Export
Apple	196,000	124,727	71,273	130,667	65,333
Orange	280,000	124,444	155,556	200,000	80,000
Banana	105,000	65,625	39,375	70,000	35,000
Strawberry	126,000	75,600	50,400	67,200	58,800
Papaya	210,000	95,455	114,545	100,000	110,000
Jack Fruit	126,000	50,400	75,600	70,000	56,000

Which Fruit has the least number of Export?

- (a) Papaya
- (b) Apple
- (c) Orange
- (d) Banana

Ans  A. 1

 B. 2

 C. 3

 D. 4

Question ID : 2233951461

Status : **Answered**

Chosen Option : D

Q.11

Identify a relationship between the given words and choose the word having similar relationship from the given choices:

Obliterate : Destroy :: Rigid : ?

- (a) Stiff
- (b) Continue
- (c) Create
- (d) Aid

Ans  A. 1

 B. 2

 C. 3

 D. 4

Question ID : 2233951469

Status : Answered

Chosen Option : A

Q.12

If day after tomorrow is Tuesday, what was day before yesterday?

- (a) Thursday
- (b) Friday
- (c) Saturday
- (d) Monday

Ans  A. 1

 B. 2

 C. 3

 D. 4

Question ID : 2233951475

Status : Answered

Chosen Option : B

Q.13

It was Sunday on Jan 1,2006. What day of the week was Jan 1,2010?

- (a) Sunday
- (b) Saturday
- (c) Friday
- (d) Wednesday

Ans  A. 1

 B. 2

 C. 3

 D. 4

Question ID : 2233951474

Status : Answered

Chosen Option : D



Q.14

The following table mentions production of various fruits and its consumptions. Answer the following question according to the details given in the table.

Fruit Varieties	Production in Tonnes	Country 1	Country 2	Domestic Consumption	Export
Apple	196,000	124,727	71,273	130,667	65,333
Orange	280,000	124,444	155,556	200,000	80,000
Banana	105,000	65,625	39,375	70,000	35,000
Strawberry	126,000	75,600	50,400	67,200	58,800
Papaya	210,000	95,455	114,545	100,000	110,000
Jack Fruit	126,000	50,400	75,600	70,000	56,000

What is the Percentage of Country 1 Production in the overall Production?

- (a) 52.81%
- (b) 53.61%
- (c) 54.71%
- (d) 51.41%

Ans  A. 1  
 B. 2  
 C. 3  
 D. 4

Question ID : 2233951460

Status : Answered

Chosen Option : D

Q.15

In certain code 'FROZEN' is written as 'OFAPSG'. Then how would 'MOLTEN' be written in that code?

- (a) OFPOMN
- (b) OFSMPN
- (c) OFUMPN
- (d) OFUNPM

Ans  A. 1  
 B. 2  
 C. 3  
 D. 4

Question ID : 2233951465

Status : Not Attempted and Marked For Review

Chosen Option : --

Q.16

If 'table' is 'book', 'book' is 'pen', 'pen' is 'eraser', 'eraser' is 'sharpener', 'sharpener' is 'pencil' and 'pencil' is 'school', then what is used by student to sharpen a pencil?

- (a) sharpener
- (b) pencil
- (c) pen
- (d) eraser

Ans  A. 1 B. 2 C. 3 D. 4

Question ID : 2233951472

Status : Answered

Chosen Option : B

Q.17

The following table mentions production of various fruits and its consumptions. Answer the following question according to the details given in the table.

Fruit Varieties	Production in Tonnes	Country 1	Country 2	Domestic Consumption	Export
Apple	196,000	124,727	71,273	130,667	65,333
Orange	280,000	124,444	155,556	200,000	80,000
Banana	105,000	65,625	39,375	70,000	35,000
Strawberry	126,000	75,600	50,400	67,200	58,800
Papaya	210,000	95,455	114,545	100,000	110,000
Jack Fruit	126,000	50,400	75,600	70,000	56,000

What is the difference between Maximum value of Domestic consumption and the Minimum value of Domestic consumption?

- (a) 142,500
- (b) 182,400
- (c) 132,800
- (d) 162,700

Ans  A. 1 B. 2 C. 3 D. 4

Question ID : 2233951456

Status : Answered

Chosen Option : C



Q.18

**Which is the odd one out**

- (a) Orange
- (b) Red
- (c) Yellow
- (d) Blue

Ans  A. 1 B. 2 C. 3 D. 4

Question ID : 2233951452

Status : Answered

Chosen Option : A

Q.19

**If  $Z = 2197$  and  $R = 729$ . How would J be written in that code?**

- (a) 216
- (b) 124
- (c) 512
- (d) 125

Ans  A. 1 B. 2 C. 3 D. 4

Question ID : 2233951467

Status : Not Attempted and  
Marked For Review

Chosen Option : --

Q.20

The following table mentions production of various fruits and its consumptions. Answer the following question according to the details given in the table.

Fruit Varieties	Production in Tonnes	Country 1	Country 2	Domestic Consumption	Export
Apple	196,000	124,727	71,273	130,667	65,333
Orange	280,000	124,444	155,556	200,000	80,000
Banana	105,000	65,625	39,375	70,000	35,000
Strawberry	126,000	75,600	50,400	67,200	58,800
Papaya	210,000	95,455	114,545	100,000	110,000
Jack Fruit	126,000	50,400	75,600	70,000	56,000

What is the difference between Maximum value of Country 1 Production and the Minimum value of Country 1 Production?

- (a) 78,524
- (b) 79,452
- (c) 74,327
- (d) 77,651

Ans  A. 1  
 B. 2  
 C. 3  
 D. 4

Question ID : 2233951458

Status : Answered





Chosen Option : C

Q.21

Arrange the following words in a meaningful sequence:

1. Probation 2. Interview 3. Selection 4. Appointment 5. Advertisement 6. Application

- (a) 123456
- (b) 562341
- (c) 654321
- (d) 132546

Ans  A. 1  
 B. 2  
 C. 3  
 D. 4

Question ID : 2233951470

Status : Answered

Chosen Option : B

Q.22

If South-East becomes North, North-East becomes West and so on. What will West become?

- (a) east
- (b) north
- (c) south-east
- (d) south-west

Ans  A. 1  
 B. 2  
 C. 3  
 D. 4

Question ID : 2233951471

Status : Answered

Chosen Option : C

Q.23

Sowmya walked 20 m towards the north. Then she turned right and walks 30 m. Then she turns right and walks 35 m. Then she turns left and walks 15 m. Finally she turns left and walks 15 m. In which direction and how many meters is she from the starting position?

- (a) 15 m West
- (b) 30 m East
- (c) 30 m West
- (d) 45 m East

Ans  A. 1  
 B. 2  
 C. 3  
 D. 4

Question ID : 2233951454

Status : Answered

Chosen Option : D

Q.24

The following table mentions production of various fruits and its consumptions. Answer the following question according to the details given in the table.

Fruit Varieties	Production in Tonnes	Country 1	Country 2	Domestic Consumption	Export
Apple	196,000	124,727	71,273	130,667	65,333
Orange	280,000	124,444	155,556	200,000	80,000
Banana	105,000	65,625	39,375	70,000	35,000
Strawberry	126,000	75,600	50,400	67,200	58,800
Papaya	210,000	95,455	114,545	100,000	110,000
Jack Fruit	126,000	50,400	75,600	70,000	56,000

The ratio of Strawberry produced for Domestic consumption to Papaya produced for Domestic consumption is

- (a) (84:126)
- (b) (84:125)
- (c) (87:125)
- (d) (87:126)

Ans  A. 1

 B. 2

 C. 3

 D. 4

Question ID : 2233951464

Status : Answered

Chosen Option : B

Q.25

Choose the word which is not similar in meaning of the given word.  
Mandatory

- (a) Binding
- (b) Compulsory
- (c) Obligatory
- (d) Discretionary

Ans  A. 1

 B. 2

 C. 3

 D. 4

Question ID : 2233951473

Status : Answered

Chosen Option : D

Section : Aptitude relating to the field of Management and Communication Skills

Q.1

Choose the odd one in the following group:

1) Letter, 2)Memorandum, 3) Notice, 4) Circular, 5)Anecdote

(a) 1

(b) 2 and 3

(c) 4

(d) 5

Ans  A. 1

 B. 2

 C. 3

 D. 4

Question ID : 2233951482

Status : Answered

Chosen Option : D

Q.2

Assertion (A): Conservation of soil resources is critical to human sustenance.

Reason (R): Soil is home to many micro-organisms and contains minerals.

(a)Both (A) and (R) are correct and (R) is the correct explanation of (A).

(b)Both (A) and (R) are correct but (R) is not the correct explanation of (A).

(c) (A) is true and (R) is false.

(d) (A) is false and (R) is true.

Ans  A. 1

 B. 2

 C. 3

 D. 4

Question ID : 2233951496

Status : Answered

Chosen Option : D

Q.3

\_\_\_\_\_ denotes concentration of authority at the top level.

(a) Decentralisation

(b) Centralisation

(c) Coordination

(d) Delegation

Ans  A. 1

 B. 2

 C. 3

 D. 4

Question ID : 2233951480

Status : Answered

Chosen Option : B

Q.4

To be a good communicator you should be able to:

- (a) Thank reasonably
- (b) Express your thoughts coherently
- (c) Express disagreements; whether it hurts is not your business
- (d) Make sure that you interrupt everyone to express your view

Ans ☒ A. 1  
☒ B. 2  
☒ C. 3  
☒ D. 4

Question ID : 2233951488  
Status : Answered  
Chosen Option : A

Q.5

There is no place for .....in an accountant's job (fill in the most suitable word)

- (a) Money
- (b) Errors
- (c) Assets
- (d) Time

Ans ☒ A. 1  
☒ B. 2  
☒ C. 3  
☒ D. 4

Question ID : 2233951490  
Status : Answered  
Chosen Option : B

Q.6

A symbol or brand that is owned by the person who created it is ...

- (a) property
- (b) business
- (c) origin
- (d) trademark

Ans ☒ A. 1  
☒ B. 2  
☒ C. 3  
☒ D. 4

Question ID : 2233951484  
Status : Answered  
Chosen Option : D

Q.7

10 is the mean of a set of 7 observations and 5 is the mean of a set of 3 observations. The mean of the combined set is given by

- (a) 7.5
- (b) 8.5
- (c) 10
- (d) 15

Ans  A. 1 B. 2 C. 3 D. 4

Question ID : 2233951500

Status : Answered

Chosen Option : B

Q.8

Rearrange the following parts in order to make a correct sentence. Choose the right sequence.

- (A) is priceless
- (B) the sacrifice
- (C) that healthcare professionals
- (D) the safety and welfare of humanity
- (E) have been making for

- (a) DBCEA
- (b) DCABE
- (c) BECDA
- (d) BCEDA

Ans  A. 1 B. 2 C. 3 D. 4

Question ID : 2233951486

Status : Answered

Chosen Option : D

Q.9

‘Webmercials’ are

- (a) Advertisements in print
- (b) Soap Operas
- (c) Advertisements on television
- (d) Internet advertisements

Ans  A. 1  
 B. 2  
 C. 3  
 D. 4

Question ID : 2233951493

Status : Answered

Chosen Option : D

Q.10

Choose the most logical order of sentences from among the given choices to construct a coherent paragraph.

- A. Industrial Revolution and vast improvements in human technology, inanimate traction, productivity and demand led to mass production and conveyance of merchandise goods and people that resulted in cross-border integration.
- B. Pre-modern societies were above all else defined by localism and decentralisation.
- C. The rapid technological advances in information technology, and volatile capital flows have become new engines of growth.
- D. With the passing of pre-modern localism, improvements in maritime technology lead to the great age of maritime exploration,

- (a) ACDB
- (b) CDBA
- (c) DCAB
- (d) BDAC

Ans  A. 1  
 B. 2  
 C. 3  
 D. 4

Question ID : 2233951492

Status : Answered

Chosen Option : D



Q.11

Company selling goods 'play to the gallery' to boost their revenue. What does this mean?

- (a) Advertise a lot
- (b) Cater to the public taste
- (c) Play some games
- (d) Trick people

Ans  A. 1  
 B. 2  
 C. 3  
 D. 4

Question ID : 2233951489

Status : Not Attempted and  
Marked For Review

Chosen Option : --

Q.12

### Debits

- (a) increase both assets and liabilities.
- (b) decrease both assets and liabilities.
- (c) increase assets and decrease liabilities.
- (d) decrease assets and increase liabilities

Ans  A. 1  
 B. 2  
 C. 3  
 D. 4

Question ID : 2233951476

Status : Not Attempted and  
Marked For Review

Chosen Option : --

Q.13

Two numbers are in the ratio 2: 5. If 8 is added to both the numbers, their ratio becomes 5: 11. The numbers are:

- (a) 16, 40
- (b) 20, 50
- (c) 28, 70
- (d) 32, 80

Ans  A. 1  
 B. 2  
 C. 3  
 D. 4

Question ID : 2233951495

Status : Answered

Chosen Option : D

Q.14

**Coordination is**

- (a) a management function.
- (b) the essence of management.
- (c) an objective of management.
- (d) a social objective.

Ans  A. 1  
 B. 2  
 C. 3  
 D. 4

Question ID : 2233951478  
Status : Answered  
Chosen Option : B

Q.15

**Indicate the part containing an error:**

(A)Many companies look for (B)candidates who already know (C)specific skills  
in order to save their time (D)in trained the new employees.

- (a) A
- (b) B
- (c) C
- (d) D

Ans  A. 1  
 B. 2  
 C. 3  
 D. 4

Question ID : 2233951487  
Status : Answered  
Chosen Option : D

Q.16

**Which of the following is an attribute of an effective manager:**

- (a) Procrastination
- (b) Laziness
- (c) Sentimental
- (d) Impartial

Ans  A. 1  
 B. 2  
 C. 3  
 D. 4


Question ID : 2233951481  
Status : Answered  
Chosen Option : A

Q.17

Sapna buys a glass, a pencil box and a cup and pays Rs. 42 to the shopkeeper. Aarti buys a cup, two pencil boxes and a glass and pays Rs. 56 to the shopkeeper. Sonam buys two glasses, a cup and two pencil boxes and pays Rs. 70 to the shopkeeper. The cost of 15 cups will be

- (a) Rs. 120
- (b) Rs. 80
- (c) Rs. 150
- (d) Rs. 140

Ans  A. 1

-  B. 2
-  C. 3
-  D. 4

Question ID : 2233951494

Status : Answered

Chosen Option : C

Q.18

A train leaves Delhi at 5 am and reaches Kanpur at 9 am. Another train leaves Kanpur at 7 am and reaches Delhi at 10:30 a.m. At what time do the two trains cross each other?

- (a) 6:36 am
- (b) 6:56 am
- (c) 7:00 am
- (d) 7:56 am

Ans  A. 1

-  B. 2
-  C. 3
-  D. 4

Question ID : 2233951498

Status : Answered

Chosen Option : D

Q.19

An unsolicited e-mail message sent to many recipients at once is a \_\_\_\_\_

- (a) Virus
- (b) Trash
- (c) Threat
- (d) Spam

Ans  A. 1

-  B. 2
-  C. 3
-  D. 4

Question ID : 2233951497

Status : Answered

Chosen Option : D

Q.20

Choose appropriate option to fill the blank:

‘Avoid clichés in a formal letter.’ ‘Clichés’ means ...

- (a) Jargon
- (b) Overused expressions
- (c) Ambiguous phrases
- (d) Discriminatory terms

Ans  A. 1  
 B. 2  
 C. 3  
 D. 4

Question ID : 2233951485

Status : Answered

Chosen Option : C

Q.21

Grapevine is a form of

- (a) formal communication.
- (b) channel of communication.
- (c) informal communication.
- (d) barrier to communication.

Ans  A. 1  
 B. 2  
 C. 3  
 D. 4

Question ID : 2233951479

Status : Answered

Chosen Option : A

Q.22

**Apple IOS is a type of**

- (a) Operating System**
- (b) Compiler**
- (c) Browser**
- (d) IP address**

**Ans**  **A. 1**

 **B. 2**

 **C. 3**

 **D. 4**

Question ID : **2233951499**

Status : **Answered**

Chosen Option : **A**

Q.23

**Which of the following is not a merit of written communication:**

- (a) Can be kept as a record**
- (b) Can be produced as a legal document**
- (c) Is a form of formal communication**
- (d) Serves as an oral record**

**Ans**  **A. 1**

 **B. 2**

 **C. 3**

 **D. 4**

Question ID : **2233951483**

Status : **Answered**

Chosen Option : **D**

Q.24

**Which one of the following is not a principle of scientific management?**

- (a) Functional foremanship**
- (b) Development of personnel**
- (c) Harmony, not discord**
- (d) Maximum, not restricted output**

**Ans**  **A. 1**

 **B. 2**

 **C. 3**

 **D. 4**

Question ID : **2233951477**

Status : **Answered**

Chosen Option : **D**

Q.25

Subramanyam reached the \_\_\_\_\_ of his career at his early thirties when he got the \_\_\_\_\_ position of CEO of a software company.

- (a) Zephyr, Desired
- (b) Zenith, Coveted
- (c) Vale, Interesting
- (d) Plethora, Lucrative

Ans  A. 1

 B. 2

 C. 3

 D. 4

Question ID : 2233951491

Status : Answered

Chosen Option : A